

# Grade 1 Mathematics Assessment

Student's Name: \_\_\_\_\_

Age: \_\_\_\_\_

Date: \_\_\_\_\_

Teacher: \_\_\_\_\_

Total Marks: 50

---

## Section A: Number Recognition (10 marks)

1. Write the missing numbers. (5 marks)

a) 1, 2, \_\_\_\_, 4, 5

b) 8, 9, \_\_\_\_, 11

c) 15, \_\_\_\_, 17

d) 19, \_\_\_\_, 21

e) 28, 29, \_\_\_\_

---

2. Circle the larger number. (5 marks)

a) 7    9

b) 12    10

c) 18    16

d) 5    3

e) 20    19

---

## Section B: Addition (10 marks)

**Solve.**

1.  $3 + 2 =$  \_\_\_\_\_
  2.  $6 + 1 =$  \_\_\_\_\_
  3.  $5 + 4 =$  \_\_\_\_\_
  4.  $8 + 2 =$  \_\_\_\_\_
  5.  $9 + 1 =$  \_\_\_\_\_
  6.  $7 + 3 =$  \_\_\_\_\_
  7.  $10 + 5 =$  \_\_\_\_\_
  8.  $4 + 6 =$  \_\_\_\_\_
  9.  $12 + 2 =$  \_\_\_\_\_
  10.  $15 + 3 =$  \_\_\_\_\_
- 

## **Section C: Subtraction (10 marks)**

**Solve.**

1.  $5 - 2 =$  \_\_\_\_\_
  2.  $8 - 3 =$  \_\_\_\_\_
  3.  $10 - 5 =$  \_\_\_\_\_
  4.  $9 - 4 =$  \_\_\_\_\_
  5.  $12 - 2 =$  \_\_\_\_\_
  6.  $15 - 5 =$  \_\_\_\_\_
  7.  $11 - 1 =$  \_\_\_\_\_
  8.  $14 - 4 =$  \_\_\_\_\_
  9.  $20 - 10 =$  \_\_\_\_\_
  10.  $18 - 3 =$  \_\_\_\_\_
- 

## **Section D: Word Problems (5 marks)**

1. Maya has **4 apples**. Her mother gives her **3 more**. How many apples does she have?

Answer: \_\_\_\_\_

---

2. Jay has **8 balloons**. Two balloons burst. How many balloons are left?

Answer: \_\_\_\_\_

---

3. There are **6 birds** on a tree. Four more birds come. How many birds are there now?

Answer: \_\_\_\_\_

---

4. Sarah has **10 sweets**. She gives away **5**. How many sweets does she have left?

Answer: \_\_\_\_\_

---

5. There are **12 fish** in a pond. Three swim away. How many fish remain?

Answer: \_\_\_\_\_

---

## Section E: Shapes (5 marks)

Name each shape.

□ \_\_\_\_\_

○ \_\_\_\_\_

△ \_\_\_\_\_

□ \_\_\_\_\_

★ \_\_\_\_\_

---

## Section F: Measurement (5 marks)

Tick (✓) the correct answer.

1. Which is **longer**?

Pencil

Eraser

---

2. Which is **heavier**?

Feather

Book

---

3. Which holds **more water**?

- Cup
- Bucket

---

4. Which is **shorter**?

- Ant
- Giraffe














---

5. Which is **lighter**?

- Brick
  - Balloon
- 

## Section G: Patterns (5 marks)

Complete each pattern.

1.     \_\_\_\_\_
2.      \_\_\_\_\_
3. 2, 4, 6, \_\_\_\_\_
4.     \_\_\_\_\_
5. 10, 9, 8, \_\_\_\_\_