






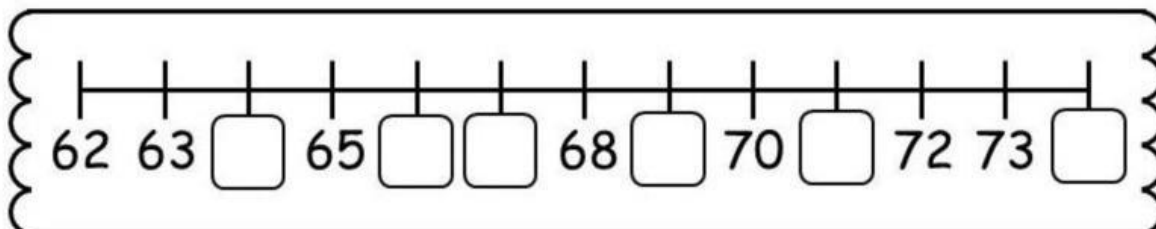
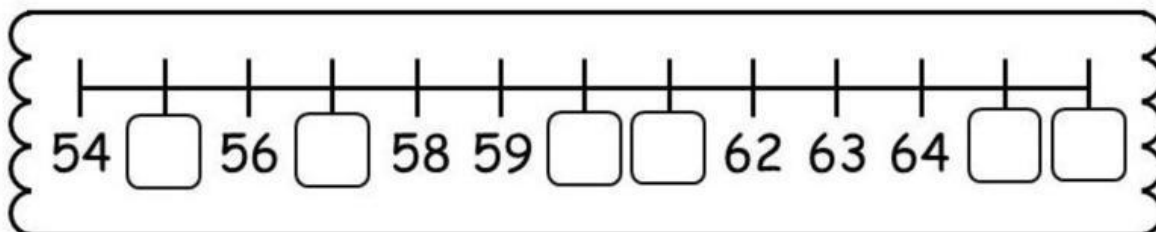
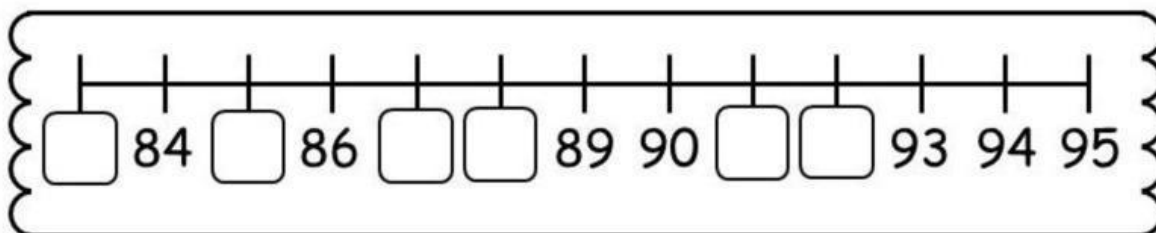
Họ và tên: \_\_\_\_\_

Ngày: \_\_\_\_\_




## 1. Đồng hồ chỉ mấy giờ?



### 2. Điền số còn thiếu



### 3. Đếm ngược

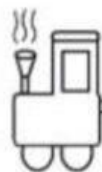


4. Sắp xếp số theo thứ tự từ bé đến lớn



79	41	19	17
----	----	----	----

--	--	--	--



17	11	32	66
----	----	----	----

--	--	--	--



10	59	4	33
----	----	---	----

--	--	--	--



36	42	69	41
----	----	----	----

--	--	--	--



63	49	23	15
----	----	----	----

--	--	--	--



26	53	21	51
----	----	----	----

--	--	--	--

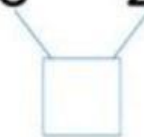


59	39	37	19
----	----	----	----

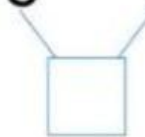
--	--	--	--

### 5. Thực hiện phép tính

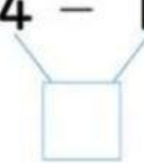
①  $6 - 2 - 1 = \square$



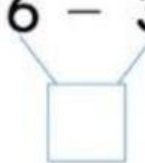
②  $5 - 1 - 2 = \square$




③  $4 - 1 - 1 = \square$



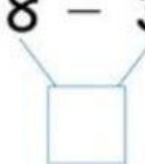
④  $6 - 3 - 1 = \square$



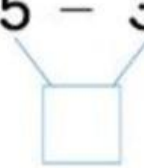
⑤  $7 - 2 - 3 = \square$




⑥  $8 - 3 - 3 = \square$




⑦  $5 - 3 - 1 = \square$



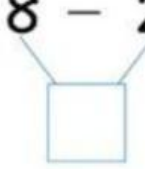
⑧  $9 - 4 - 3 = \square$



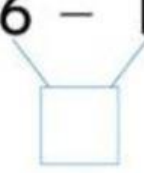
⑨  $7 - 3 - 3 = \square$




⑩  $8 - 2 - 3 = \square$



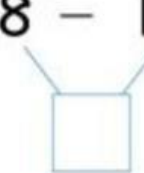
⑪  $6 - 1 - 3 = \square$



⑫  $7 - 1 - 4 = \square$



⑬  $8 - 1 - 5 = \square$



⑭  $9 - 5 - 2 = \square$

