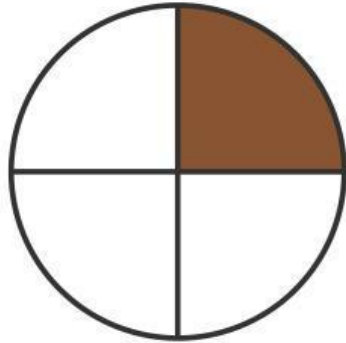


LES FRACCIONS

Observa la imatge i marca la fracció correcta.

1

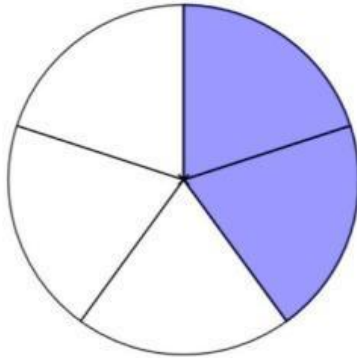


$1/2$

$1/3$

$1/4$

2

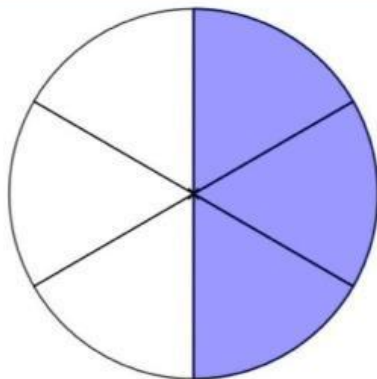


$2/3$

$2/5$

$3/5$

3

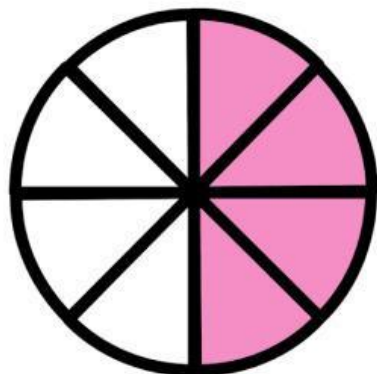


$1/2$

$3/6$

$2/6$

4



$3/4$

$4/8$

$1/4$