

Actividad: Observe las fracciones y escriba con letra.
(observa ejemplo)

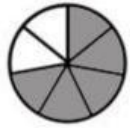


$$\frac{2}{8}$$

Dos octavos



$$\frac{4}{7}$$




$$\frac{5}{7}$$



$$\frac{3}{10}$$



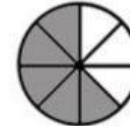
$$\frac{1}{6}$$



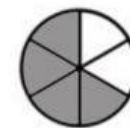
$$\frac{7}{8}$$



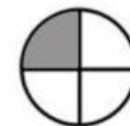
$$\frac{1}{5}$$



$$\frac{5}{8}$$

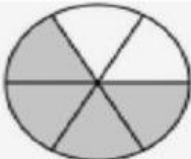
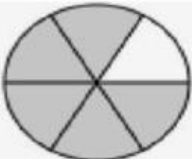

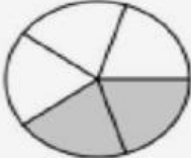



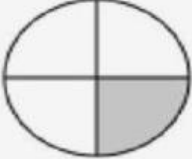
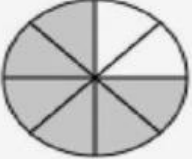
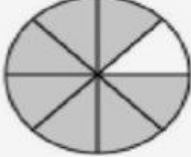
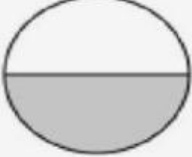
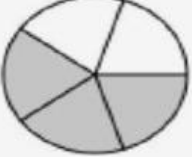
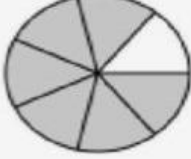
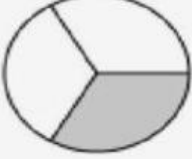
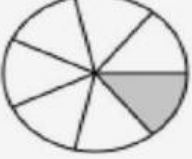











$$\frac{4}{6}$$







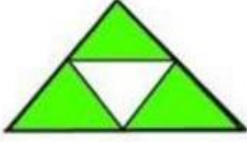
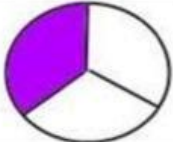



$$\frac{1}{4}$$

Escribe la fracción, como el ejemplo.

 = $\frac{2}{6}$	 = —	 = —
 = —	 = —	 = —
 = —	 = —	 = —
 = —	 = —	 = —
 = —	 = —	 = —
 = —	 = —	 = —
 = —	 = —	 = —
 = —	 = —	 = —

Identifica el gráfico de la fracción correcta ✓, como el ejemplo.

1)		$\frac{1}{2}$	$\frac{3}{6}$	$\frac{5}{6}$	$\frac{1}{6}$	$\frac{6}{5}$
2)		$\frac{1}{4}$	$\frac{3}{4}$	$\frac{1}{6}$	$\frac{1}{3}$	$\frac{1}{5}$
3)		$\frac{1}{2}$	$\frac{3}{8}$	$\frac{1}{6}$	$\frac{1}{7}$	$\frac{6}{8}$
4)		$\frac{1}{3}$	$\frac{3}{6}$	$\frac{1}{2}$	$\frac{1}{5}$	$\frac{1}{4}$
5)		$\frac{4}{6}$	$\frac{5}{6}$	$\frac{4}{5}$	$\frac{1}{6}$	$\frac{3}{5}$
6)		$\frac{1}{3}$	$\frac{1}{4}$	$\frac{1}{2}$	$\frac{1}{5}$	$\frac{2}{1}$
7)		$\frac{1}{2}$	$\frac{3}{4}$	$\frac{5}{6}$	$\frac{1}{4}$	$\frac{4}{3}$
8)		$\frac{1}{6}$	$\frac{2}{3}$	$\frac{3}{3}$	$\frac{1}{3}$	$\frac{2}{5}$
9)		$\frac{3}{5}$	$\frac{3}{4}$	$\frac{5}{4}$	$\frac{4}{6}$	$\frac{4}{5}$