

**BENEDET SCHOOL  
 SCHOOL YEAR 2025-2026  
 THIRD TERM ASSESMENT**

<b>SUBJECT:</b>	Science	<b>TEACHER:</b>	Lic. Cristina Trejo
<b>DATE:</b>		<b>PUNCTUATION:</b>	/ 14
<b>GRADE:</b>	8th E.G.B.	<b>FINAL SCORE:</b>	
<b>NAME AND LASTNAME</b>			

**Instructions.**

Read the questions carefully before answering them.

1. Drag and drop the words below to complete the statement. (4 points)

particles	together	exploded	Big Bang Theory
-----------	----------	----------	-----------------


**How did the universe begin?**

The most famous explanation is the " B  ". This theory says that all the matter in the universe was once t  in one place. Then the matter e  and billions of p  travelled in all directions. These particles formed the different celestial bodies.



2. Write the correct number of each component of the Universe. (4 points)

1. ALIEN	2. PLANET	3. GALAXY	4. STARS
----------	-----------	-----------	----------



3. Read and circle the correct answer.

(2 points)

1. What is the main source of energy for the Solar System?


- a) The Moon
- b) The Sun
- c) Jupiter

2. Which planet is known as the "Red Planet"?

- a) Venus
- b) Mars
- c) Saturn

4. Match with lines the planets with the correct statement.

(4 points)




Mars



Earth



Venus



Mercury

Where we live

The hottest planet

The smallest planet  
in our solar system

Known as the "red  
planet"