
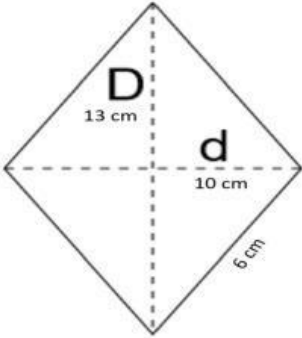


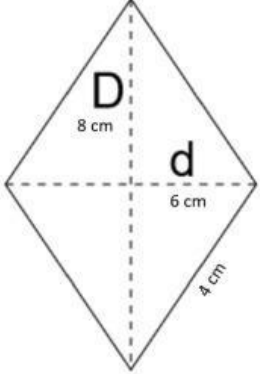


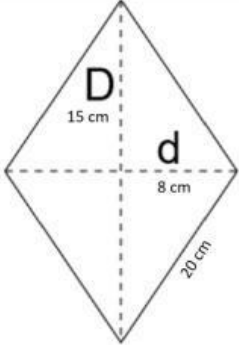
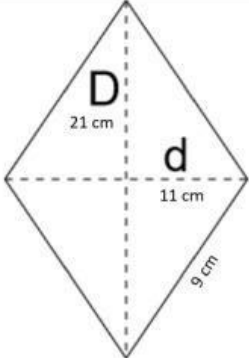




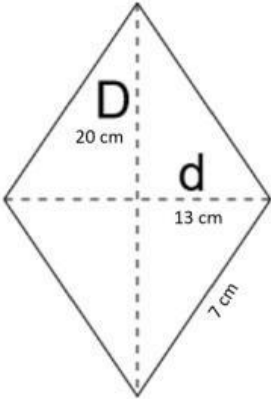




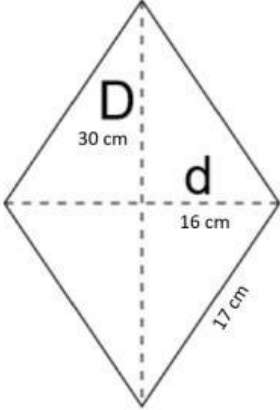

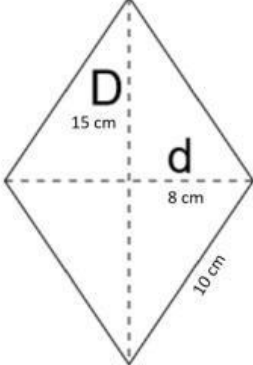


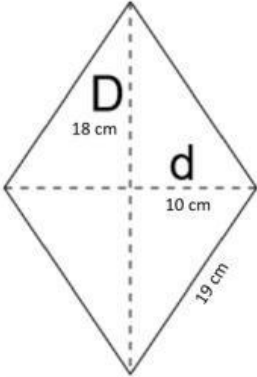
Instrucciones: Calcular el perímetro y el área de las siguientes figuras.

FIGURA	PERÍMETRO	ÁREA
 <p style="text-align: center;">15 cm</p>	<p style="text-align: center;">P = _____ cm</p>	<p style="text-align: center;">A = _____ cm²</p>
	<p style="text-align: center;">P = _____ cm</p>	<p style="text-align: center;">A = _____ cm²</p>
 <p style="text-align: center;">12 cm</p> <p style="text-align: right;">6 cm</p>	<p style="text-align: center;">P = _____ cm</p>	<p style="text-align: center;">A = _____ cm²</p>
 <p style="text-align: center;">11 cm</p>	<p style="text-align: center;">P = _____ m</p>	<p style="text-align: center;">A = _____ m²</p>

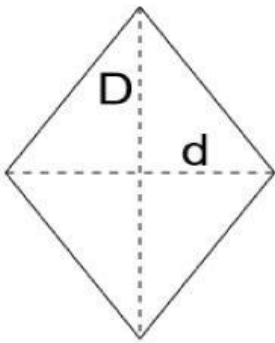
	$P = \underline{\hspace{2cm}} \text{ cm}$	$A = \underline{\hspace{2cm}} \text{ cm}^2$
	$P = \underline{\hspace{2cm}} \text{ cm}$	$A = \underline{\hspace{2cm}} \text{ cm}^2$
	$P = \underline{\hspace{2cm}} \text{ cm}$	$A = \underline{\hspace{2cm}} \text{ cm}^2$
	$P = \underline{\hspace{2cm}} \text{ cm}$	$A = \underline{\hspace{2cm}} \text{ cm}^2$
	$P = \underline{\hspace{2cm}} \text{ cm}$	$A = \underline{\hspace{2cm}} \text{ cm}^2$

 <p>9 cm</p>	<p>P = _____ cm</p>	<p>A = _____ cm²</p>
 <p>10 cm</p> <p>6 cm</p>	<p>P = _____ cm</p>	<p>A = _____ cm²</p>
 <p>12 cm</p>	<p>P = _____ cm</p>	<p>A = _____ cm²</p>
 <p>13 cm</p> <p>9 cm</p>	<p>P = _____ cm</p>	<p>A = _____ cm²</p>
 <p>D 20 cm</p> <p>d 13 cm</p> <p>7 cm</p>	<p>P = _____ cm</p>	<p>A = _____ cm²</p>


 <p>25 cm</p> <p>20 cm</p>	<p>$P = \underline{\hspace{2cm}} \text{ cm}$</p>	<p>$A = \underline{\hspace{2cm}} \text{ cm}^2$</p>
 <p>5 cm</p>	<p>$P = \underline{\hspace{2cm}} \text{ cm}$</p>	<p>$A = \underline{\hspace{2cm}} \text{ cm}^2$</p>
 <p>D 30 cm</p> <p>d 16 cm</p> <p>17 cm</p>	<p>$P = \underline{\hspace{2cm}} \text{ cm}$</p>	<p>$A = \underline{\hspace{2cm}} \text{ cm}^2$</p>
 <p>15 cm</p> <p>10 cm</p>	<p>$P = \underline{\hspace{2cm}} \text{ cm}$</p>	<p>$A = \underline{\hspace{2cm}} \text{ cm}^2$</p>
 <p>D 15 cm</p> <p>d 8 cm</p> <p>10 cm</p>	<p>$P = \underline{\hspace{2cm}} \text{ cm}$</p>	<p>$A = \underline{\hspace{2cm}} \text{ cm}^2$</p>

	$P = \underline{\hspace{2cm}} \text{ cm}$	$A = \underline{\hspace{2cm}} \text{ cm}^2$
---	---	---

Instrucciones: Relacione la figura con el cálculo de su área.



$$A = b \cdot h$$



$$A = \frac{D \cdot d}{2}$$



$$A = L^2$$