

Inagua All Age School
Summer Term Examinations
Grade 2
Math Computation




Name: _____

Date: _____

Teacher: _____


Answer all questions in this booklet. Show working.



Section A: Addition and Subtraction with regrouping



Meteorologist Math

Directions: Solve each problem below.



	$\begin{array}{r} 715 \\ - 320 \\ \hline \end{array}$	$\begin{array}{r} 926 \\ - 227 \\ \hline \end{array}$	$\begin{array}{r} 367 \\ - 177 \\ \hline \end{array}$	$\begin{array}{r} 503 \\ - 456 \\ \hline \end{array}$
	$\begin{array}{r} 207 \\ + 469 \\ \hline \end{array}$	$\begin{array}{r} 887 \\ + 47 \\ \hline \end{array}$	$\begin{array}{r} 458 \\ + 363 \\ \hline \end{array}$	$\begin{array}{r} 109 \\ + 506 \\ \hline \end{array}$

Section B: Coins and bills

Count the dollars and cents record and read your answer.



1. \$ _____



2. \$ _____



3. \$ _____

(2 marks each)

Section C: Multiplication as repeated addition. (1 mark each)

$\begin{array}{r} 8 \\ \times 3 \\ \hline \end{array}$	$\begin{array}{r} 4 \\ \times 4 \\ \hline \end{array}$	$\begin{array}{r} 2 \\ \times 4 \\ \hline \end{array}$
--	--	--

Section E: Division as repeated subtraction

$12 \div 2 =$	$18 \div 3 =$
$14 \div 2 =$	$21 \div 3 =$