


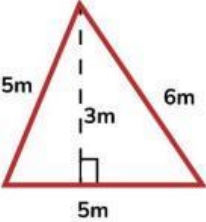
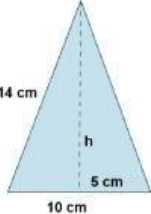


https://youtu.be/v_pifs5fn2U

Instrucciones: Calcular el perímetro y el área de las siguientes figuras.

FIGURA	PERÍMETRO	ÁREA
 <p>d = 6 cm D = 10 cm L = 9 cm</p>	P = _____ cm	A = _____ cm ²
 <p>d = 5 cm D = 9 cm L = 8 cm</p>	P = _____ cm	A = _____ cm ²
 <p>d = 6 cm D = 8 cm L = 5 cm</p>	P = _____ cm	A = _____ cm ²
	P = _____ m	A = _____ m ²
	P = _____ cm	A = _____ cm ²