



GEOMETRY-SHAPES IDENTIFICATION



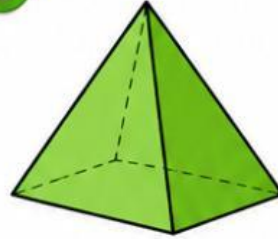
Choose correct option

1




- A** Rectangle
- B** Sphere
- C** Cylinder
- D** Cube

2




- A** Sphere
- B** Cone
- C** Cube
- D** Pyramid

3



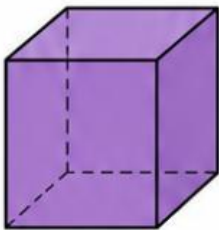
- A** Triangle
- B** Rectangle
- C** Circle
- D** Sphere

4



- A** Cylinder
- B** Rectangle
- C** Cone
- D** Circle

5



- A** Cube
- B** Circle
- C** Pyramid
- D** Rectangle

6



- A** Cube
- B** Circle
- C** Rectangle
- D** Cylinder

7



- A** Cube
- B** Square
- C** Triangle
- D** Rectangle

8



- A** Rectangle
- B** Cube
- C** Cone
- D** Triangle



Ramaswamy
Kodam

