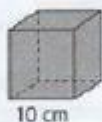


LEMBAR KERJA PESERTA DIDIK

Mata Pelajaran : Matematika
Kelas : V (Lima)
Nama :

A. Tentukan Volume Kubus di bawah ini !

1.



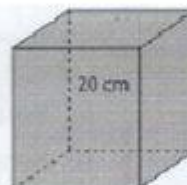
Volume = ____ cm^3

3.



Volume = ____ cm^3

5.



Volume = ____ cm^3

2.



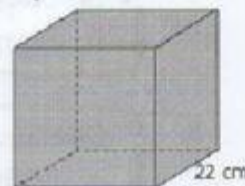
Volume = ____ cm^3

4.



Volume = ____ cm^3

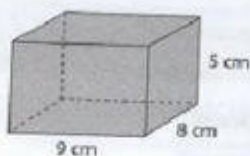
6.



Volume = ____ cm^3

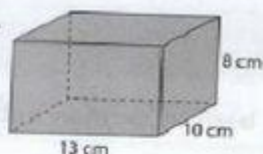
B. Tentukan Volume Balok di bawah ini!

1.



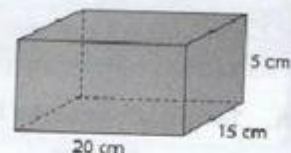
Volume = ____ cm^3

3.



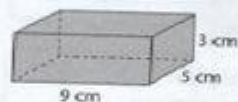
Volume = ____ cm^3

5.



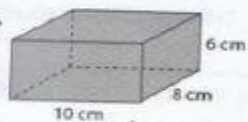
Volume = ____ cm^3

2.



Volume = ____ cm^3

4.



Volume = ____ cm^3

6.



Volume = ____ cm^3