







Recognize 2D shapes with their attributes

Objective: Students can identify 2D shapes with their features.

Part 1: Count the sides

★ Count how many **sides** each shape has.
Draw a line to match the shape with the correct number.



3

0





4

5

4

Part 2: Count the corners

★ Count how many **corners (vertices)** each shape has.
Draw a line to match the shape with the correct number.



3

0

4

4

5

