

Let's explore  
3-D shapes!










# Faces, Edges and Vertices of 3-D Shapes

Geometry Worksheet



Fill in the following table.

Shape	Name	Number of Faces	Number of Edges	Number of Vertices
	Triangular Pyramid			
	Square Pyramid			
	Cube			
	Cuboid			
	Triangular Prism			
	Pentagonal Prism			
	Hexagonal Prism			



**Faces**  
are the  
flat  
surfaces.

**Edges**  
are the  
lines where  
faces meet.

**Vertices**  
are the  
corner  
points.



Ramaswamy Kodam