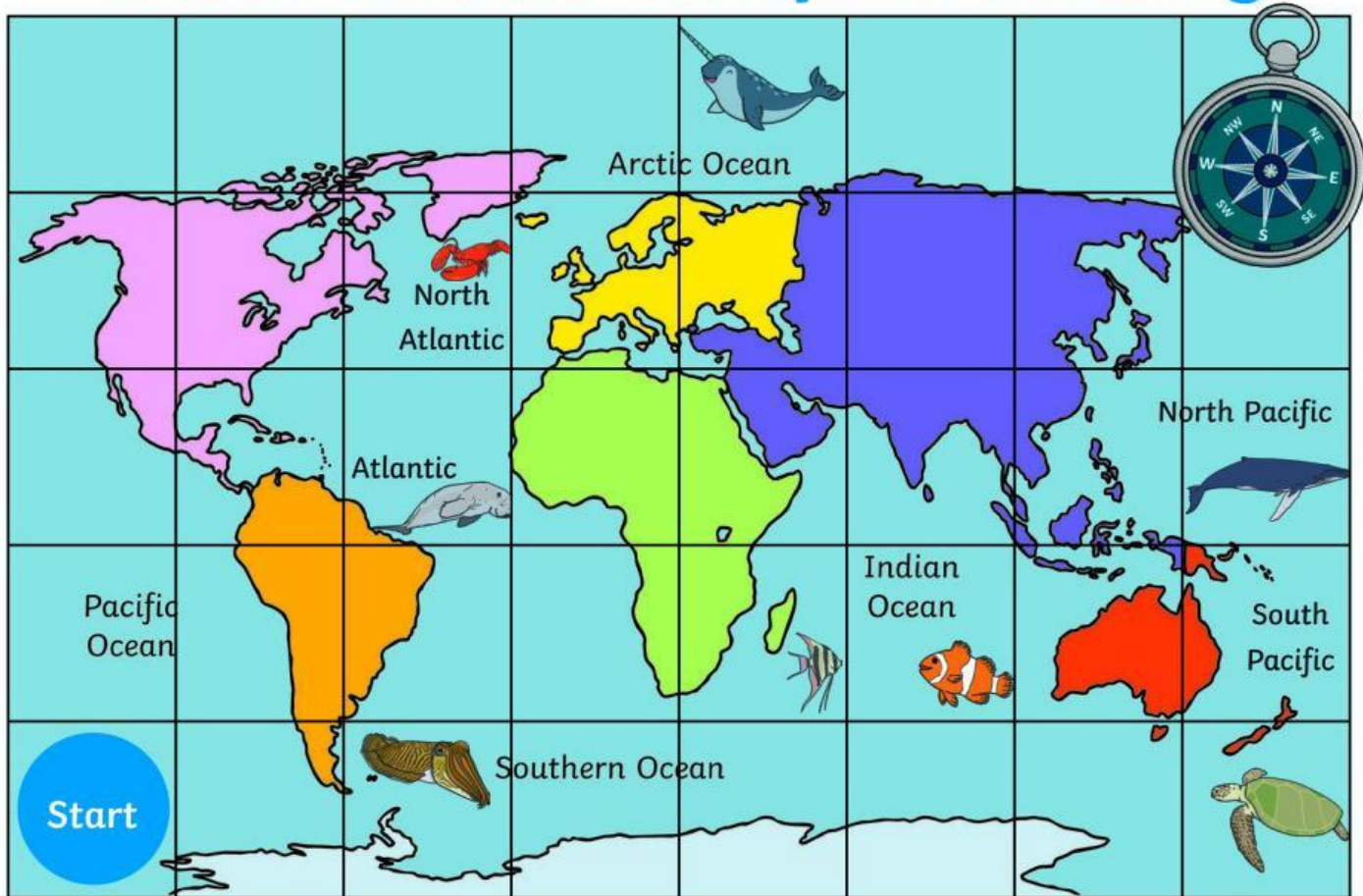










World Oceans Compass Activity



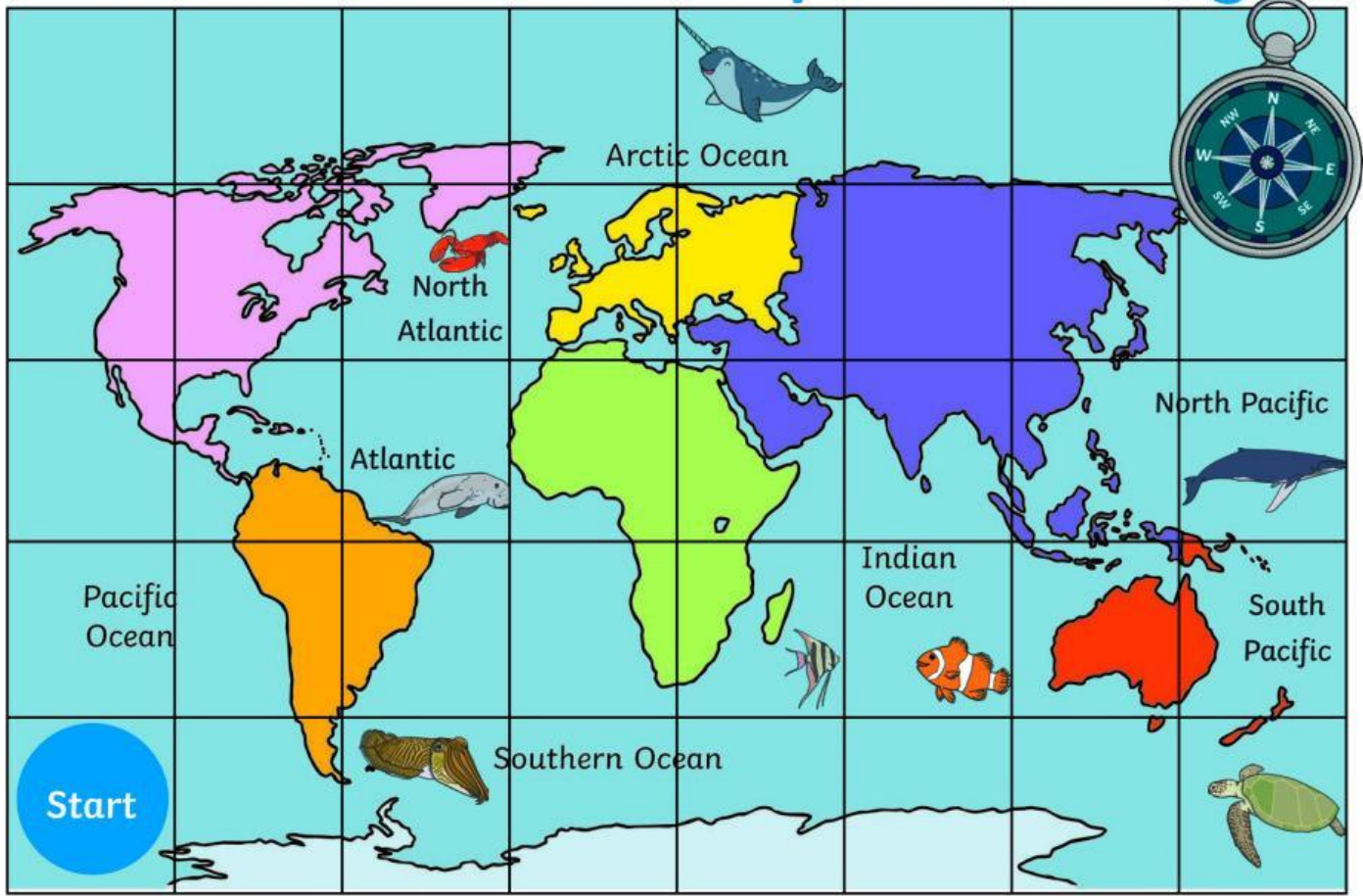
Sea creatures to find:

-  humpback whale
-  green sea turtle
-  manatee
-  lobster
-  narwhal
-  cuttlefish
-  clownfish
-  angelfish









Compass Directions

1. From the start, go east 2 squares. Which sea creature do you meet? _____
2. From the narwhal, go south 3 squares. Which sea creature do you meet? _____
3. From the cuttlefish, go north 3 squares. Which sea creature do you meet? _____
4. From the angelfish, go east 1 square. Which sea creature do you meet? _____
5. Start at the humpback whale. How do you get to the green sea turtle? _____

World Oceans Compass Activity



Sea creatures to find:

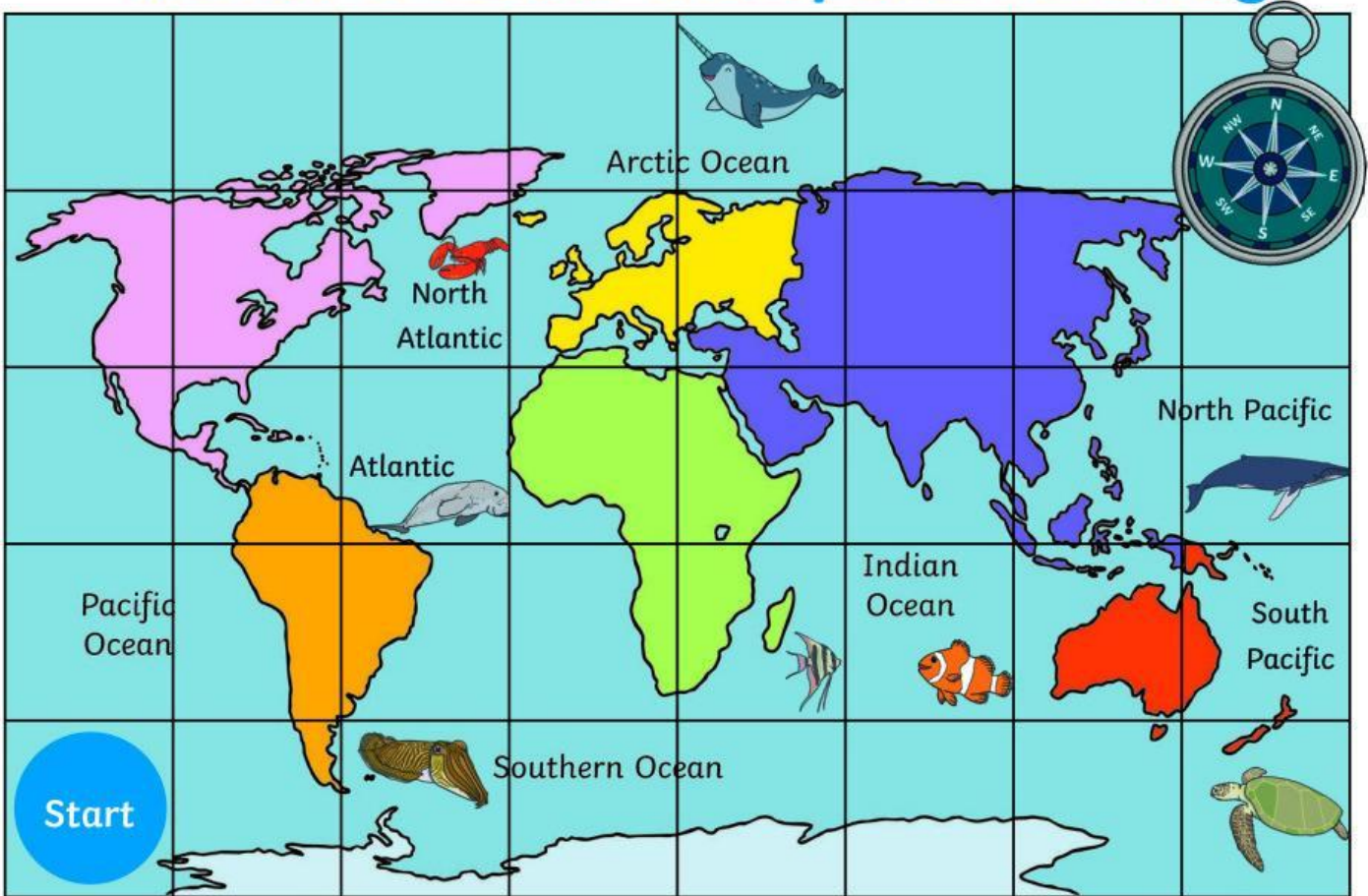
-  humpback whale
-  green sea turtle
-  manatee
-  lobster
-  narwhal
-  cuttlefish
-  clownfish
-  angelfish

Compass Directions

1. From the start, go east 7 squares . Which sea creature do you meet? _____
2. From the start, go north 2 squares and east 2 squares. Which sea creature do you meet? _____
3. From the narwhal, go west 2 squares and south 1 square. Which sea creature do you meet? _____
4. From the green sea turtle go west 3 squares and north 1 square. Which sea creature do you meet?

5. Start at the humpback whale. Using only the directions north, south, east and west, how do you get to the narwhal ? _____

World Oceans Compass Activity



Sea creatures to find:



humpback whale



green sea turtle



manatee



lobster



narwhal



cuttlefish



clownfish



angelfish

Compass Directions

1. From the start, go east 7 squares and north 2 squares. Which sea creature do you meet? _____
2. From the start, go north 3 squares and east 2 squares. Which sea creature do you meet? _____
3. Start at the clownfish. Using only the directions north, south, east and west, how do you get to the lobster? _____
4. Start at the whale. Go 1 square to the west, then 1 square to the south-west. Which creature do you meet? _____
5. Describe a way you could get to the manatee using any direction on the compass. _____
