

# Cambridge Primary Mathematics 1

## SETS

Name: \_\_\_\_\_

Date: \_\_\_\_\_

Class: \_\_\_\_\_

**Part 1. These pairs of shoes are sorted into two sets.**




How many pairs of shoes with laces?

How many pairs of shoes without laces?

How many pairs of shoes are there altogether?

**Part 2. These cats are sorted into two sets.**

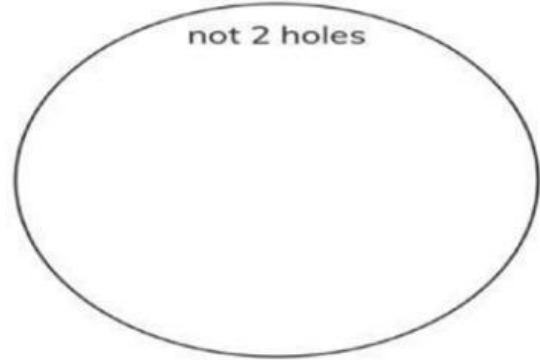
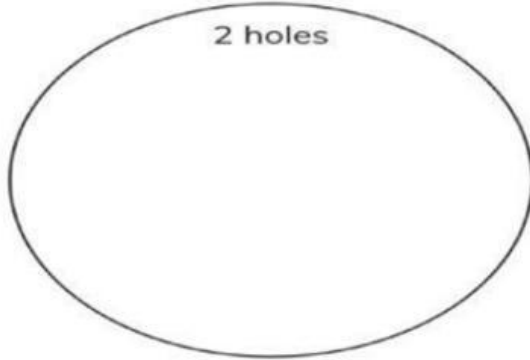
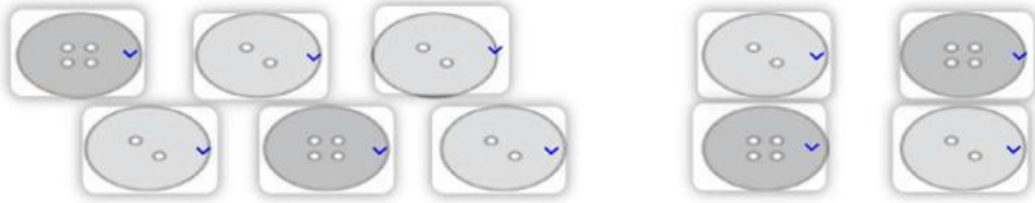


How many cats are sitting?

How many cats are not sitting?

How many cats are there altogether?

**Part 3. Draw the buttons into the correct set.**



**Part 4. Zara asks her family for their favourite animals.**



Draw a ring around the correct answers.

Which animal is liked by the most people?



Which animal is liked by the fewest people?

