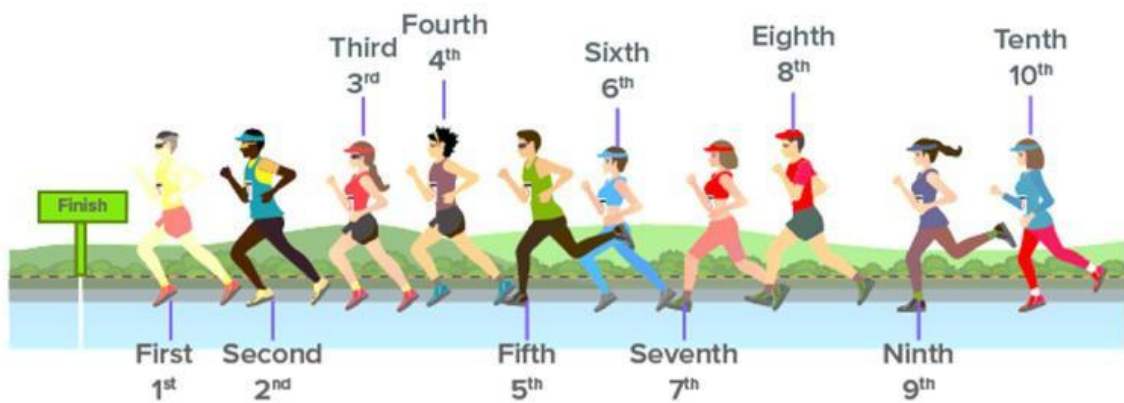


CAMBRIDGE PRIMARY MATHEMATICS 1
POSITIONS

Name: _____ Date: _____ Class: _____




Ordinal Numbers






1. Read and circle.

(a) Circle the 2nd horse.




(b) Circle the 3rd bird.

1st




(c) Circle the 5th fish.

1st



(d) Circle the 4th chicken.

1st



(e) Circle the 6th elephant.

1st



2. Write the ordinal number of the coloured cake in each row of cakes.



1st



2nd



3rd



4th



5th

					3rd

3. Look, read and circle the correct answer.





(a) Where is the  in the line?

A. 6th

B. 5th

C. 4th

(b) Who is between the  and the  in the line?



(c) Where is the  in the line?

A. 1st

B. 2nd

C. 3rd

(d) Who is between the  and the  in the line?

