

## Quadrilaterals

Match the quadrilateral with its definition.

- \_\_\_\_\_ 1. All sides are the same length.  
There are four right angles.


- \_\_\_\_\_ 2. There is only one pair of parallel sides.

- \_\_\_\_\_ 3. Opposite sides are parallel and the  
same length. There are four right angles.

- \_\_\_\_\_ 4. There are two pairs of parallel sides.  
All sides are the same length.


- \_\_\_\_\_ 5. There are two pairs of opposite parallel  
sides.

a.



Parallelogram

b.



Rectangle

c.



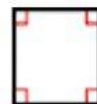
Trapezoid

d.



Rhombus

e.



Square

6. List two ways a rectangle and square are alike and one way in which they are different.

---

---

---

---