

Cambridge Primary Mathematics 1

Review Unit 1

Name: _____

Date: _____

Class: _____

1. Match each set to the correct number.

a


3

1

2

3

2



b

3

2

5

4

6



c

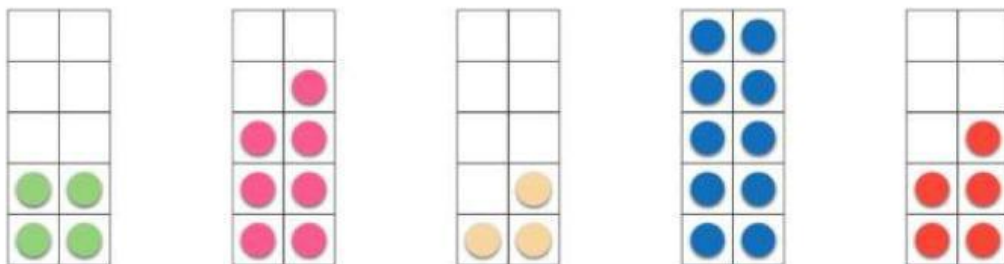
7

3


4

5

10




2. How many animals are there? Estimate then count.



Estimate

Count



Estimate

Count

3. Count to 10. Write the missing numbers.

1		3	4			7		9	10
---	--	---	---	--	--	---	--	---	----

4. Write the number that comes after.

4	
---	--

6	
---	--

5. Write the number that comes before.

	7
--	---

	9
--	---

6. Write the missing numbers.

4		6
---	--	---

		8
--	--	---

7. Trace the numbers. Then match the numbers with their names.

six	1
three	2
one	3
five	4
seven	5
ten	6
nine	7
two	8
eight	9
four	10

8. Write the missing number words.


1	2	3	4	5
one		three		five
6	7	8	9	10
	seven		nine	

9. Draw a line to match the words with the correct drawings.


a pairs

3 5 9


b odd numbers



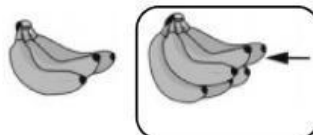
c equal



d more than



e less than



10. Compare the sets.

(a) Tick (✓) the set that has fewer insects.






(b) Tick (✓) the set that has more insects.



(c) Tick (✓) the sets that have the same number of animals.



11. Compare the sets. Complete the sentences.

apples	oranges	bananas

seven	more	four	fewer	the same	four
-------	------	------	-------	----------	------

There are _____ apples, _____ oranges and _____ bananas.

There are _____ oranges than apples.

There are _____ bananas than oranges.

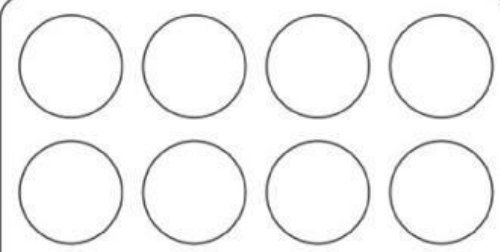
The number of apples and bananas is _____

How many more oranges than apples? _____

How many fewer bananas than oranges? _____

Write a number that is greater than 7 _____

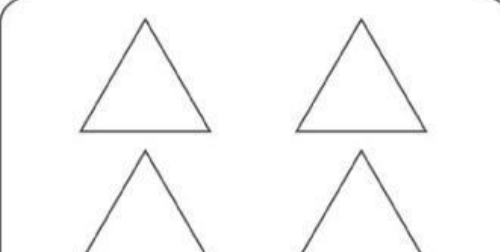
12. Count the shapes in each box and circle the correct answer.



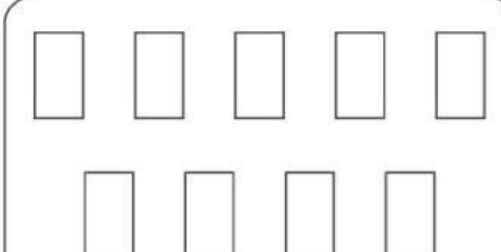
Odd Even




Odd Even



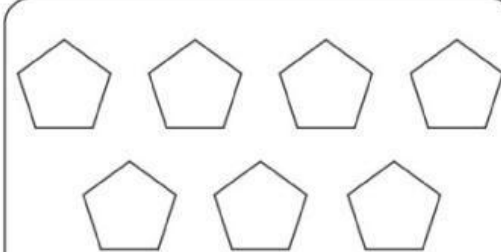
Odd Even



Odd Even



Odd Even



Odd Even