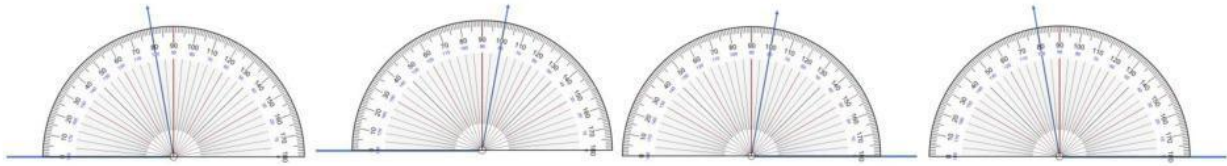


6. (a) Draw and label angle $ABC = 80^\circ$. [2]



Option A

Option B

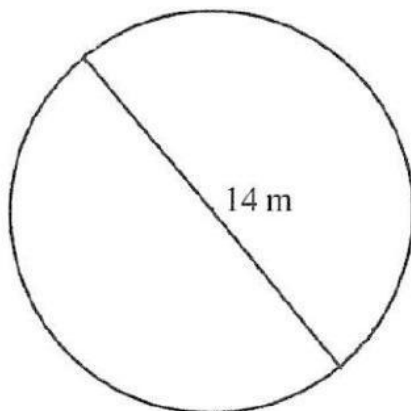
Option C

Option D

- (b) What type of angle is ABC ?

Answer: _____ [1]

6. Use $\pi = \frac{22}{7}$, calculate the perimeter of the circle.



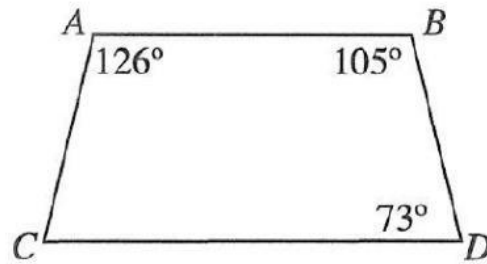
Answer: _____ [2]

6. John scored 24 out of 40 on a test. Calculate his percentage score.



Answer: _____ [2]

6. $ABCD$ is a quadrilateral. Calculate the size of angle C .



NOT TO SCALE

Answer: _____ $^\circ$ [3]

6. Calculate the value of $12 + 8 \div 4$

Answer: _____ [2]

6. Express 88% as a

(a) decimal,

Answer: _____ [2]

(b) fraction in its lowest term.

Original Fraction = _____

Reduced Fraction = _____

Answer: _____ [2]

6. Mary scored 18 out of 25 on her science test.

Calculate her percentage score.

Answer: _____ [2]