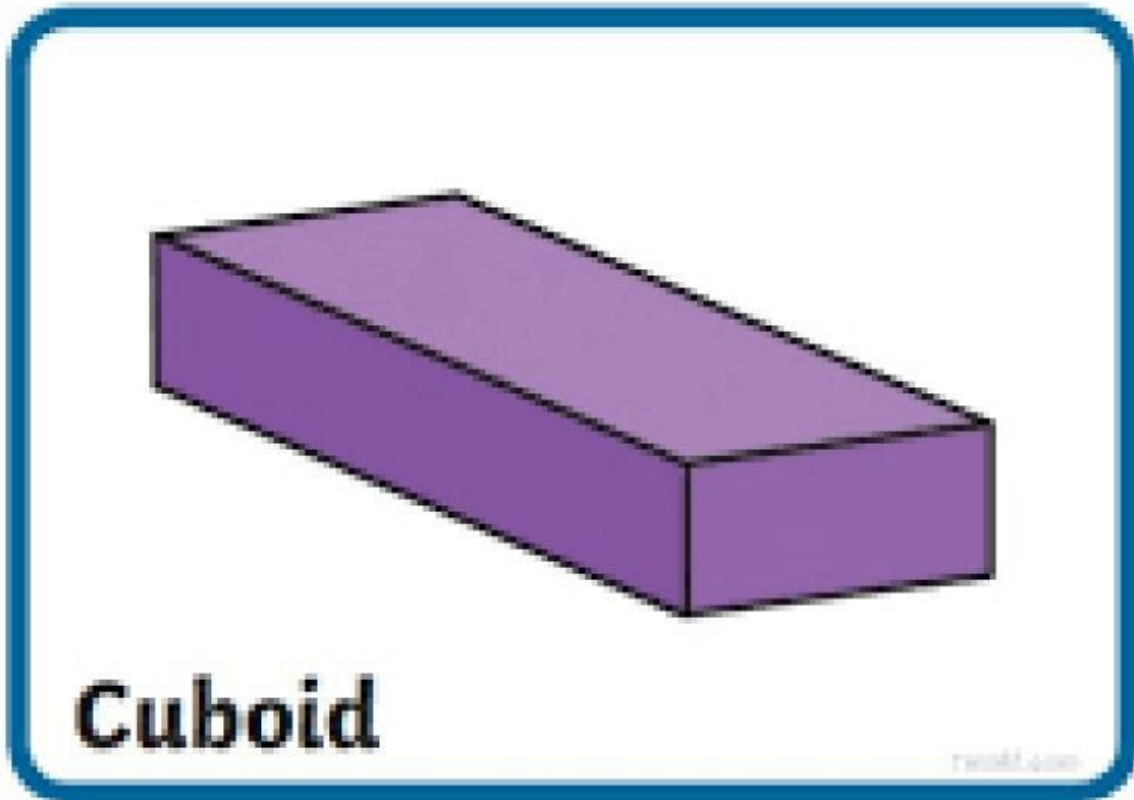


Mathematics Worksheet – Cuboid

Name: _____



1. Fill in the Blanks

A cuboid has:

- _____ faces
- _____ edges
- _____ vertices

2. Tick (✓) the Correct Answer

1. A cuboid has flat faces.
Yes No
2. A cuboid looks like a box.
Yes No
3. A cuboid has corners called vertices.
Yes No

3. Equal or Not Equal?

Circle the answer.

1. Some faces on a cuboid are the same size.

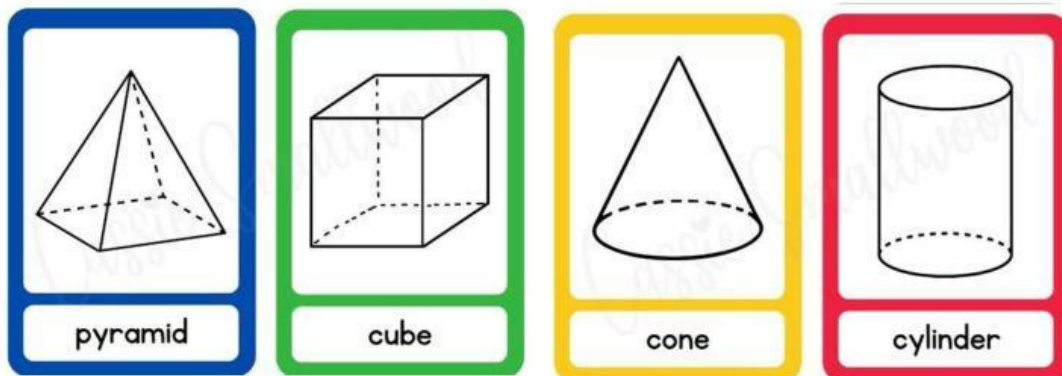
Equal / Not Equal

2. A cuboid can have edges that are different lengths.

Equal / Not Equal

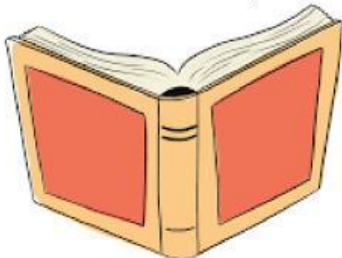
4. Which Shape is Like a Cuboid?

Tick (✓) the shape that has the same number of faces, edges, and vertices as a cuboid.



5. Match the Cuboid Objects

Is this a cuboid, yes or no?



6. Draw a Cuboid Object

Draw one thing at home that looks like a cuboid. **Bring drawing to school when school resumes.**