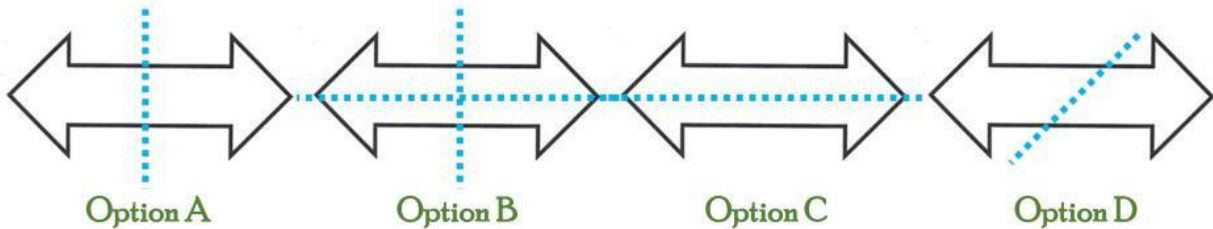



3. Draw in all line(s) of symmetry in the shape below. [2]



3. Write one hundred twenty thousand five hundred six in figures.

Answer: _____ [1]

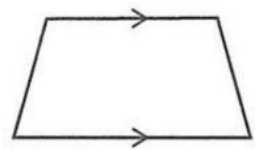
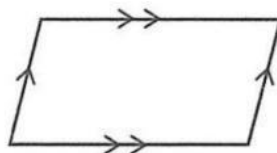
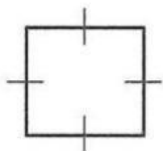
3. Which of the letter(s) below has 2 lines of symmetry?

H T R

Answer: _____ [1]

3. Using the words in the box below, name each of the given shapes.

Trapezium	Square	Kite	Parallelogram
-----------	--------	------	---------------

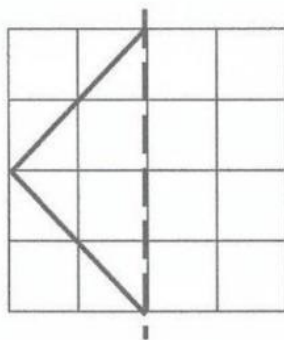


(a) _____

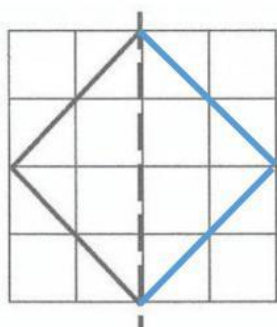
(b) _____

(c) _____

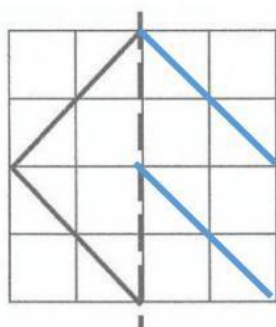
3. Complete the shape about the line of symmetry given.



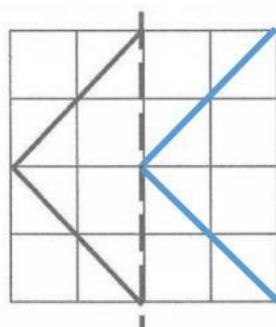
[2]



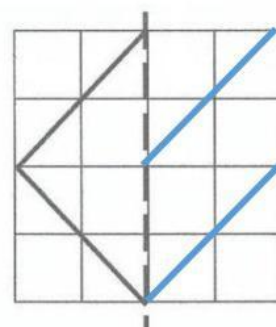
Option A



Option B



Option C



Option D

3. State the value of 2 in 53276

Answer: _____ [1]

3. Insert $<$, $>$ or $=$ to make a true statement. [3]

(a) 8.7 _____ 8.07 $<$ $>$ $=$

(b) 71.3 _____ 71.30 $<$ $>$ $=$

(c) 354.6 _____ 354.68 $<$ $>$ $=$