

# Física: Ejercicios de Fuerzas Resultantes

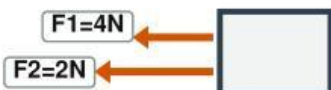
Nivel: 3º ESO — Determina el módulo de la  $F_R$  en cada bloque

1



$F_R = \underline{\hspace{2cm}} N$

2



$F_R = \underline{\hspace{2cm}} N$

3



$F_R = \underline{\hspace{2cm}} N$

4



---


$$F_R = \text{_____ N}$$

5



---


$$F_R = \text{_____ N}$$

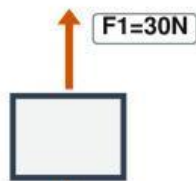
6



---


$$F_R = \text{_____ N}$$

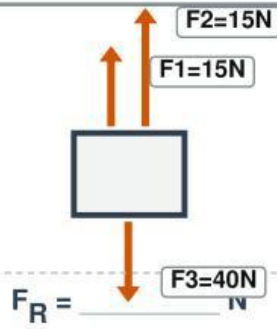
7



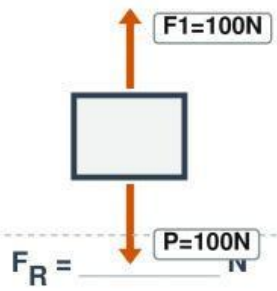
---


$$F_R = \text{_____ N}$$

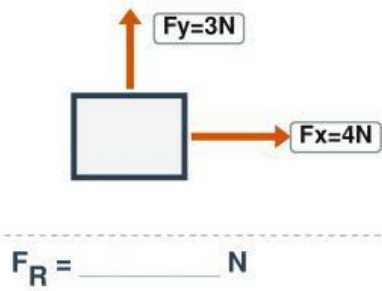
8



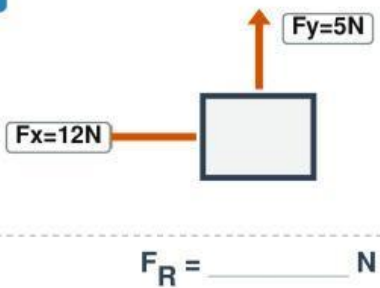
9



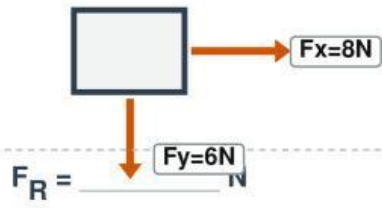
10



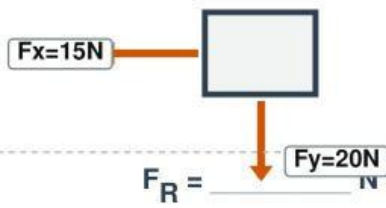
11



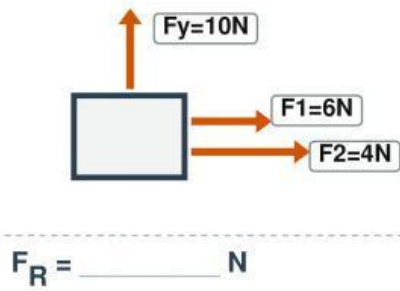
12



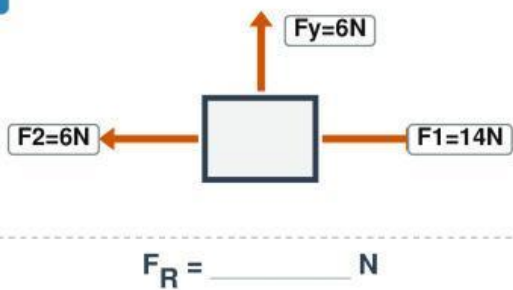
13



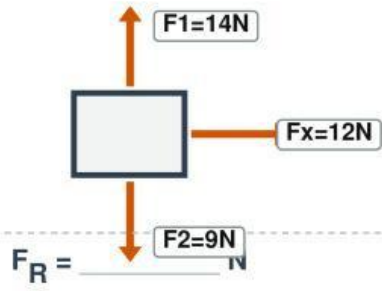
14



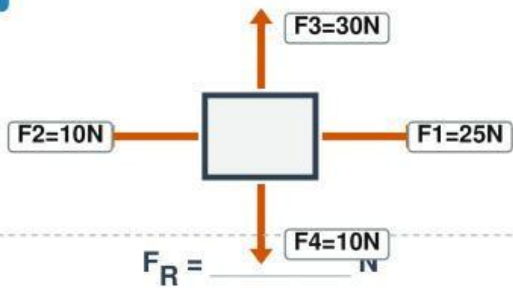
15



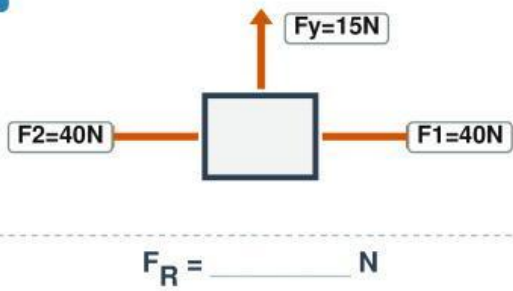
16



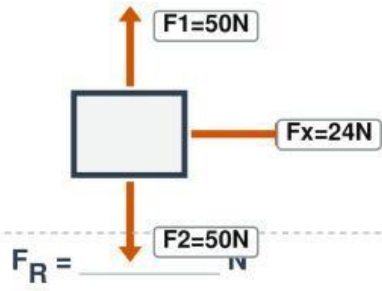
17



18



19



20

