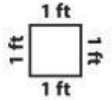


Name : _____

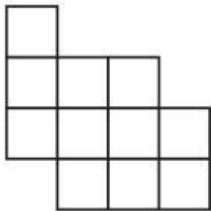
Perimeter

Sheet 1



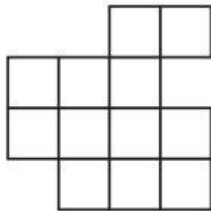
Find the perimeter of each shape.

1)



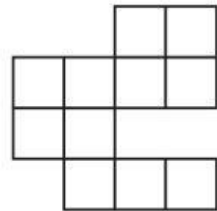
Perimeter = _____ ft

2)




Perimeter = _____ ft

3)



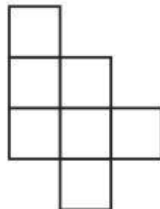
Perimeter = _____ ft

4)




Perimeter = _____ ft

5)



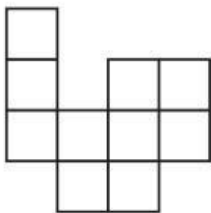
Perimeter = _____ ft

6)



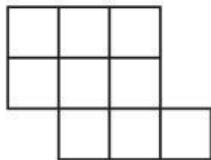
Perimeter = _____ ft

7)




Perimeter = _____ ft

8)




Perimeter = _____ ft

9)



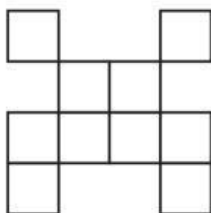
Perimeter = _____ ft

10)



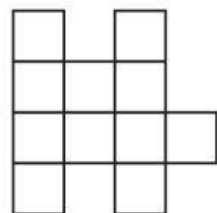
Perimeter = _____ ft

11)



Perimeter = _____ ft

12)



Perimeter = _____ ft