

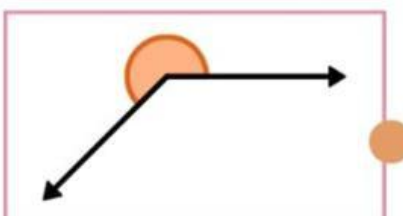
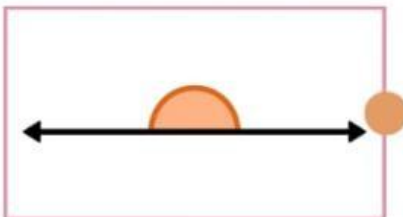
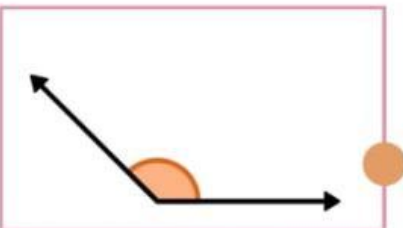
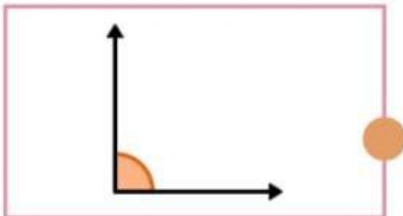
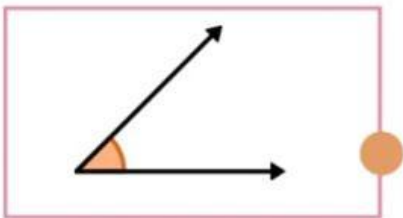
LATIHAN 1

JENIS-JENIS SUDUT

Nama: _____

Kelas: _____

Amati sudut berikut. Hubungkan gambar sudut dengan nama sudut yang sesuai!



Sudut Tumpul

Sudut Lancip

Sudut Siku-siku

Sudut Refleks

Sudut Lurus