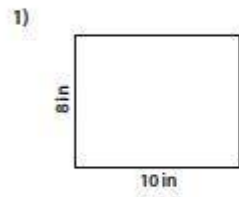


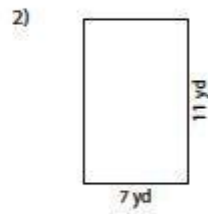
## Area of a Rectangle

---

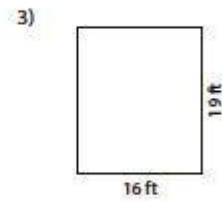
Find the area of each rectangle.



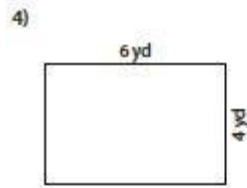
Area = \_\_\_\_\_



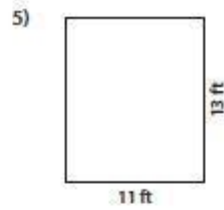
Area = \_\_\_\_\_



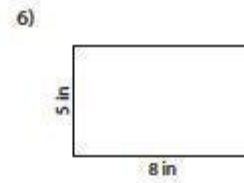
Area = \_\_\_\_\_



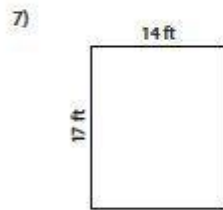
Area = \_\_\_\_\_



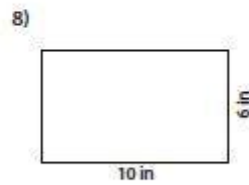
Area = \_\_\_\_\_



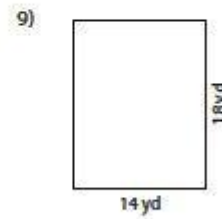
Area = \_\_\_\_\_



Area = \_\_\_\_\_



Area = \_\_\_\_\_



Area = \_\_\_\_\_