


LEMBAR KERJA PESERTA DIDIK

LKPD

MATEMATIKA



NAMA :






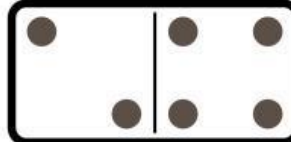





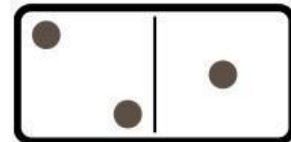

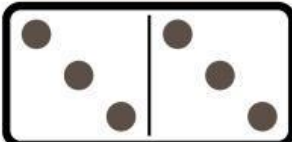
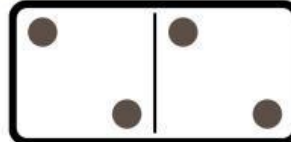
KELAS :

Amati teka teki yang tersedia lalu isi kolom yang kosong dengan jawaban yang tepat

2	x	...	=	8	x	...	=	16
		x				x		
		3				2	x	7 = ...
		=				=		x
		...		3	x	...	=	12
				x				2
				...	x	2	=	...
				=				x
		2	x	9	=	...		1
		x						=
...		x	6 = 12
x		=				x		
5	x	4	=	x	9 = ...
=						=		
10						4	x	4 = 16


Penjumlahan Domino

Hitunglah jumlah domino berikut.


$$3 + 5 = \boxed{8}$$

$$4 + 4 = \boxed{}$$

$$3 + 4 = \boxed{}$$

$$2 + 6 = \boxed{}$$

$$5 + 3 = \boxed{}$$

$$2 + 4 = \boxed{}$$

$$1 + 1 = \boxed{}$$

$$6 + 6 = \boxed{}$$

$$1 + 6 = \boxed{}$$

$$3 + 2 = \boxed{}$$

$$5 + 5 = \boxed{}$$

$$2 + 1 = \boxed{}$$

$$6 + 3 = \boxed{}$$

$$3 + 3 = \boxed{}$$

$$2 + 2 = \boxed{}$$

PENJUMLAHAN

Ayo menghitung buah – buahan berikut !



MEMASANGKAN PECAHAN

Pasangkan gambar pecahan berikut dengan angka yang benar.



$$\frac{1}{2}$$



$$\frac{2}{9}$$



$$\frac{1}{4}$$



$$\frac{4}{6}$$



$$\frac{3}{8}$$



$$\frac{1}{6}$$



SOAL LATIHAN OPERASI HITUNG DASAR




PETUNJUK :

Hubungkan setiap soal operasi hitung dasar dengan jawaban yang benar!

$5 + 3$ •

12

• $15 - 9$

 $12 - 5$ •

4

• 3×5 

6×2 •

7

• $20 \div 5$

$16 \div 4$ •

11

• $8 + 6$

$9 + 7$ •

15

5

• $18 - 7$ 

14