


LEMBAR KERJA PESERTA DIDIK

LKPD

MATEMATIKA



NAMA :






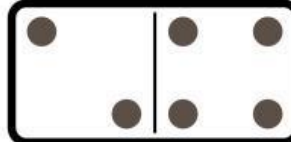





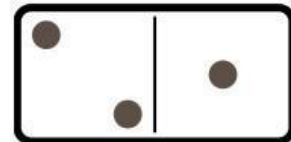

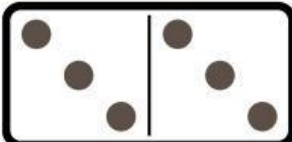
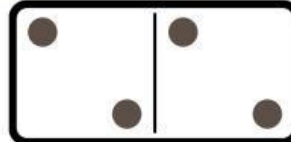
KELAS :

Amati teka teki yang tersedia lalu isi kolom yang kosong dengan jawaban yang tepat

2	x	...	=	8	x	...	=	16
		x				x		
		3				2	x	7 = ...
		=				=		x
		...		3	x	...	=	12
				x				2
				...	x	2 =		...
				=			x	=
		2	x	9 =			1	=
		x					=	
...		x	6 = 12
x		=				x		
5	x	4 =				...	x	9 = ...
=						=		
10						4	x	4 = 16


Penjumlahan Domino

Hitunglah jumlah domino berikut.


$$3 + 5 = \boxed{8}$$

$$4 + 4 = \boxed{}$$

$$3 + 4 = \boxed{}$$

$$2 + 6 = \boxed{}$$

$$5 + 3 = \boxed{}$$

$$2 + 4 = \boxed{}$$

$$1 + 1 = \boxed{}$$

$$6 + 6 = \boxed{}$$

$$1 + 6 = \boxed{}$$

$$3 + 2 = \boxed{}$$

$$5 + 5 = \boxed{}$$

$$2 + 1 = \boxed{}$$

$$6 + 3 = \boxed{}$$

$$3 + 3 = \boxed{}$$

$$2 + 2 = \boxed{}$$

PENJUMLAHAN

Ayo menghitung buah – buahan berikut !

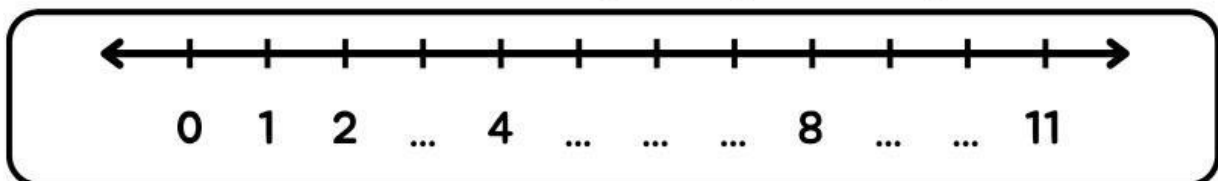


GARIS BILANGAN

Lengkapilah garis bilangan berikut dengan bilangan yang benar!



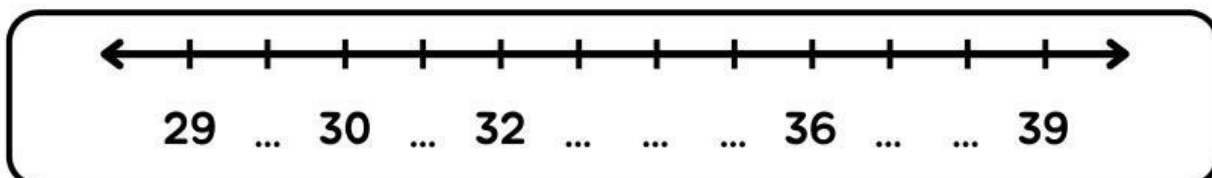
1. Isilah titik-titik berikut dengan angka 0 sampai 11!



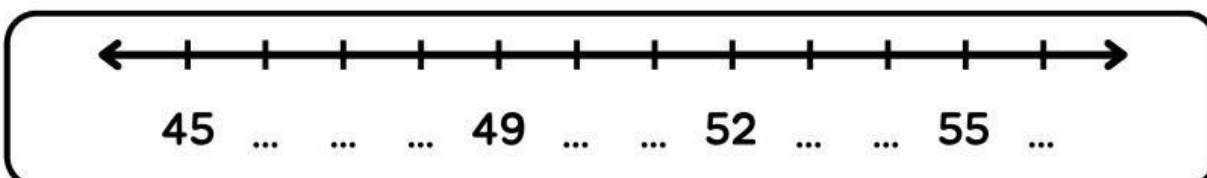
2. Isilah titik-titik berikut dengan angka yang tepat!



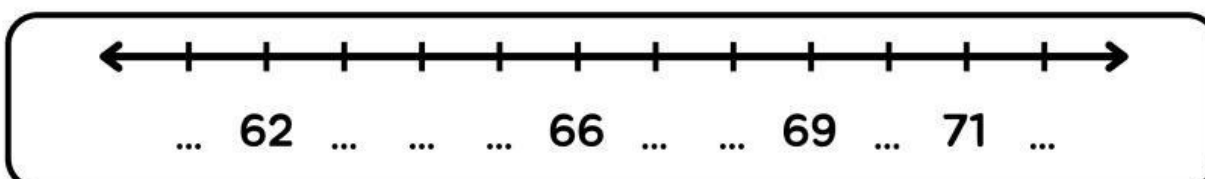
3. Isilah titik-titik berikut dengan angka 29 sampai 39!



4. Isilah titik-titik berikut dengan angka yang tepat!



5. Isilah titik-titik berikut dengan angka yang tepat!



Nama :

Kelas :

PUZZLE PERKALIAN

Kerjakanlah operasi hitung perkalian di bawah ini agar kamu dapat menyatukan gambar dengan tepat!

3×3	4×5	5×6	6×2	7×2	8×1	9×2
3×6	4×7	5×8	6×4	7×6	8×2	9×8
3×7	4×8	5×7	6×8	7×8	8×8	9×9
3×9	4×9	5×9	6×9	7×9	8×10	6×10

20 80 30 63 14 8 42

18 32 28 40 24 18 16

35 21 36 54 81 64 56

27 9 72 12 48 45 60