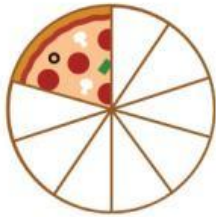


Nama :

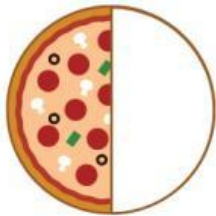
Kelas :

## BILANGAN PECAHAN

Pasangkanlah gambar di sebelah kiri dengan bilangan pecahan yang sesuai!




$$\frac{1}{3}$$



$$\frac{3}{6}$$



$$\frac{3}{7}$$



$$\frac{1}{2}$$



$$\frac{1}{9}$$



$$\frac{2}{10}$$