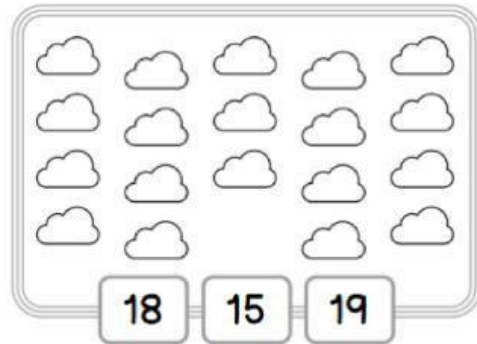
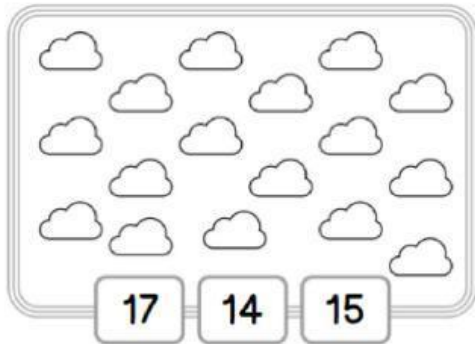
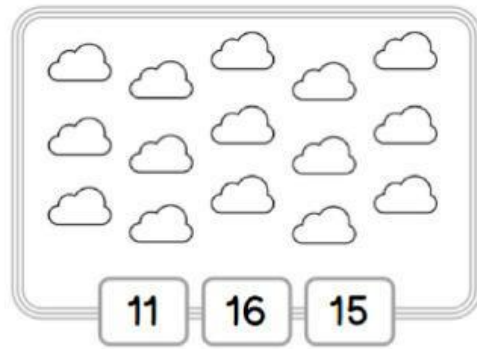
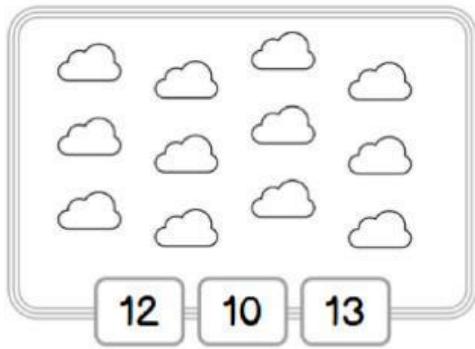


1. CONTA E SEGNA IL NUMERO GIUSTO



2. CONTA, SCRIVI IL NUMERO E REGISTRA SULL'ABACO



3. SCRIVI IL PRECEDENTE E IL SUCCESSIVO

← -1		→ +1
	15	
	12	
	19	
	18	
	16	

← -1		→ +1
	14	
	17	
	11	
	13	
	10	

4. SISTEMA I NUMERI IN ORDINE CRESCENTE

11 • 6 • 9 • 10 • 14 • 0 • 2 • 7 • 18 • 17

____ • ____ • ____ • ____ • ____ • ____ • ____ • ____ • ____ • ____

5. SISTEMA I NUMERI IN ORDINE CRESCENTE

8 • 17 • 19 • 2 • 0 • 11 • 16 • 13 • 3 • 5

____ • ____ • ____ • ____ • ____ • ____ • ____ • ____ • ____ • ____

6. COMPLETA CON IL SIMBOLO < , > o =

12 15

19 9

18 13

20 20

14 11

16 17

15 15

13 3

14 15

20 10

11 17

19 9