

## Practice test 1

- 1 Max is an excellent guitarist and enjoys playing to an audience. This is part of his:
  - (A) ethnicity
  - (B) nationality
  - (C) identity
- 2 When Sabenda talks about her ethnic group, she tells people about:
  - (A) her East Indian ancestry
  - (B) Hinduism
  - (C) the Caribbean island where she lives
- 3 All individuals are different. This is referred to as:
  - (A) diversity
  - (B) university
  - (C) ethnicity
- 4 Jason wants to improve his fitness. Which of these should he do?
  - (A) have an exercise regime
  - (B) play computer games
  - (C) eat healthily
- 5 Members of Class 6B had a problem with many of them arriving late for classes. Their teacher described this as a problem with:
  - (A) humility
  - (B) punctuality
  - (C) accountability
- 6 Which is the best description of an extended family?
  - (A) two parents and children living together
  - (B) a single parent and his or her children
  - (C) a family which includes grandparents or other relatives
- 7 The family is described as:
  - (A) a formal, voluntary, primary group
  - (B) an informal, involuntary, primary group
  - (C) an informal, voluntary, secondary group
- 8 How many generations are there in a nuclear family?
  - (A) one
  - (B) two
  - (C) three
- 9 How might parents carry out the economic function of the family?
  - (A) by ensuring children go to school
  - (B) by reproducing children to continue the population
  - (C) by earning and spending money
- 10 The Smith family are planning on moving house. The parents talk through the options with their three children. This is likely to create:
  - (A) trust and understanding
  - (B) humility and honesty
  - (C) resentment and rebellion
- 11 Which of the following information is not normally required on a group membership form?
  - (A) name and address
  - (B) date of birth
  - (C) exam results
- 12 Which of the following groups is secondary, involuntary and formal?
  - (A) family
  - (B) school
  - (C) music club

1 (A) (B) (C)

5 (A) (B) (C)

9 (A) (B) (C)

2 (A) (B) (C)

6 (A) (B) (C)

10 (A) (B) (C)

3 (A) (B) (C)

7 (A) (B) (C)

11 (A) (B) (C)

4 (A) (B) (C)

8 (A) (B) (C)

12 (A) (B) (C)

- 13** Marvin's group are working together on a project in the school grounds. How can they best ensure everyone learns how to use the camera?
- (A) taking turns
  - (B) one person taking charge of it and allowing others to try it sometimes
  - (C) the group leader and his friend taking all the photos

- 14** Melicia likes to play football but she is often left out by the boys. This is referred to as what?
- (A) stereotyping
  - (B) discrimination
  - (C) gender balance

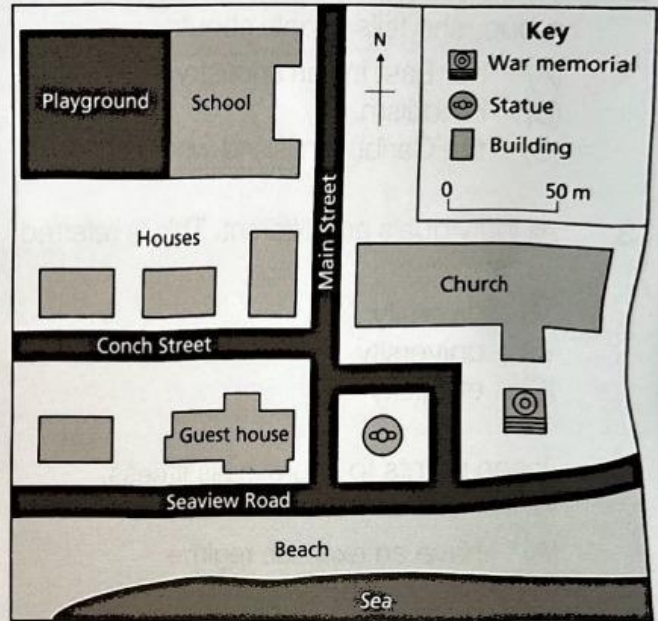
Use the picture below to help answer question **15**.



- 15** Lucas wants to be a good citizen in his community. What should he do?
- (A) Say a polite 'Good morning' to Mrs Davis.
  - (B) Help Mrs Davis by offering to carry her shopping bags.
  - (C) Grab her bags without asking and take them home for her.

- 16** Which of the following is NOT an aspect of community identity?
- (A) the name of the town
  - (B) the success of the town cricket team
  - (C) the location of the town

Use the map below to answer questions **17 – 19**.



Map of Cayman Bay

- 17** Which of the following are landmarks in Cayman Bay?
- (A) Seaview Road and the war memorial
  - (B) the statue and the church
  - (C) the school and the beach
- 18** In which direction from the beach is the playground?
- (A) north-west
  - (B) south-east
  - (C) north-east

- 13** (A) (B) (C)  
**14** (A) (B) (C)

- 15** (A) (B) (C)  
**16** (A) (B) (C)

- 17** (A) (B) (C)  
**18** (A) (B) (C)

- 19 Why is the war memorial important?
- (A) It reminds us not to fight wars.  
 (B) It commemorates the sacrifice of local people who were killed in war.  
 (C) It is useful as a landmark to find your way in the village.

- 20 Which of the following groups brought the Holy Koran to the Caribbean?

(A) Hindus  
 (B) Muslims  
 (C) Jews

- 21 The first peoples to have settled in the Caribbean were:

(A) Africans and Europeans  
 (B) Indians and Chinese  
 (C) Amerindians and Europeans

- 22 Which of the following is associated mainly with our African ancestors?

(A) making canoes  
 (B) growing rice  
 (C) drumming

- 23 Which of the following are you most likely to find at the top of an official government document?

(A) the coat-of-arms  
 (B) the flag  
 (C) the national pledge

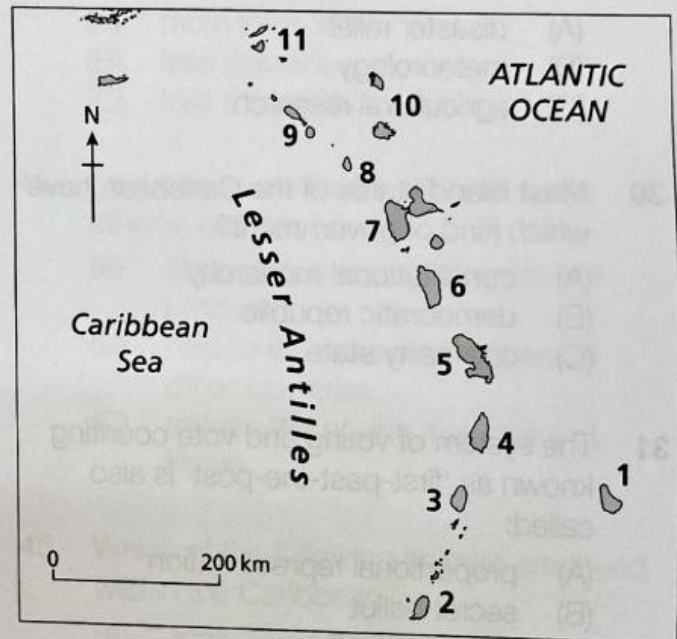
- 24 Carys is going on holiday to Europe. What is she likely to need before she goes?

(A) driving licence and passport  
 (B) air ticket, passport and visa  
 (C) Social Security card, air ticket and passport

- 25 Facial recognition software is often used for digital security. What other types of unique personal identification do we have?

(A) footprints and handshakes  
 (B) name and address  
 (C) fingerprints and signature

Use the map below to answer questions 26, 27 and 28.



Map of the Lesser Antilles

- 26 Identify the number of the island of Barbados.

(A) 1  
 (B) 2  
 (C) 4

- 27 What is the name of the country at 3?

(A) St Lucia  
 (B) St Vincent and the Grenadines  
 (C) St Kitts and Nevis

19 (A) (B) (C)  
 20 (A) (B) (C)  
 21 (A) (B) (C)

22 (A) (B) (C)  
 23 (A) (B) (C)  
 24 (A) (B) (C)

25 (A) (B) (C)  
 26 (A) (B) (C)  
 27 (A) (B) (C)

- 28** Which island lies immediately to the north-west of Guadeloupe?  
 (A) Antigua  
 (B) Grenada  
 (C) Montserrat
- 29** CARICOM has many regional agencies which facilitate cooperation between member countries. What is the role of CARDI?  
 (A) disaster relief  
 (B) meteorology  
 (C) agricultural research
- 30** Most island states of the Caribbean have which kind of government?  
 (A) constitutional monarchy  
 (B) democratic republic  
 (C) one-party state
- 31** The system of voting and vote counting known as 'first-past-the-post' is also called:  
 (A) proportional representation  
 (B) secret ballot  
 (C) simple majority
- 32** Which is an important function of a House of Assembly?  
 (A) overseeing the work of the courts  
 (B) making laws  
 (C) organising local services
- 33** Which of the following types of courts is the highest or most important?  
 (A) Magistrates Court  
 (B) Supreme Court  
 (C) Eastern Caribbean Court of Appeal
- 34** Which documents show that you are a citizen of your country?  
 I birth certificate  
 II ID card  
 III passport  
 (A) I and II  
 (B) II and III  
 (C) I, II and III
- 35** The place where electors go to cast their votes in a general election is called:  
 (A) the ballot station  
 (B) the polling station  
 (C) the voting station
- 36** Michael is riding his bike to school. He wants to turn left at the junction. What should he do?  
 (A) Put his left arm out to indicate left.  
 (B) Wave his left arm up and down to show he is turning.  
 (C) Hold tight to the handlebars with both hands in case he should fall.
- 37** Lulu has met a new friend in an online chat room. What should she do?  
 (A) Arrange to meet the friend for a coffee.  
 (B) Invite the new friend to come to her house when her parents are out.  
 (C) Tell her parents about the friend.
- 38** Resources such as soil, water, plants and animals are:  
 (A) renewable  
 (B) non-renewable  
 (C) non-recyclable

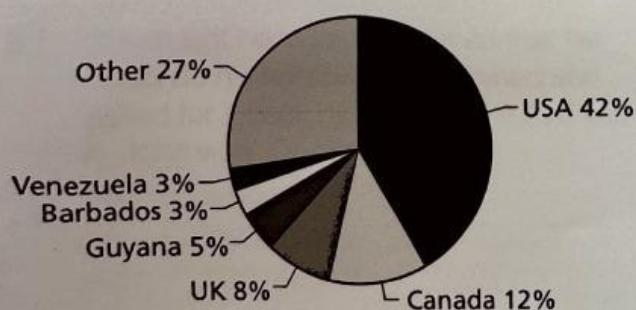
- 28** (A) (B) (C)  
**29** (A) (B) (C)  
**30** (A) (B) (C)  
**31** (A) (B) (C)

- 32** (A) (B) (C)  
**33** (A) (B) (C)  
**34** (A) (B) (C)  
**35** (A) (B) (C)

- 36** (A) (B) (C)  
**37** (A) (B) (C)  
**38** (A) (B) (C)

- 39** Agriculture relies on which main natural resources?  
 (A) soil, water, air and plants  
 (B) land, rivers and factories  
 (C) machinery, soil and livestock
- 40** Marianne uses shells, driftwood and other things that she finds on the beach to make jewellery for the tourists. Which kind of industry is she involved in?  
 (A) primary and secondary  
 (B) secondary  
 (C) tertiary or services
- 41** Human resources can be improved and developed by which of these?  
 I exports of goods  
 II health services  
 III education  
 (A) I and II  
 (B) II and III  
 (C) I, II and III
- 42** Which is the second most important single country from which tourists came to Country A in 2019?  
 (A) Canada  
 (B) USA  
 (C) UK
- 43** According to the chart, approximately what percentage of tourists came from other Caribbean countries?  
 (A) more than 30%  
 (B) less than 5%  
 (C) less than 10%
- 44** Caribbean countries trade with each other in order to:  
 (A) obtain the products they do not produce  
 (B) help to increase employment in other countries  
 (C) reduce the goods they make at home

Use the pie chart below to answer questions **42** and **43**.



Country A: Origin of visitors, 2019

- 45** Which of the following animals are found wild in the Caribbean?  
 (A) lions, tigers and monkeys  
 (B) manatees, sharks and agouti  
 (C) parrots, pigs and cattle
- 46** Which of the following is an example of carelessness which may damage the local environment?  
 (A) lighting a fire in the open  
 (B) taking home empty containers after a picnic  
 (C) dropping a glass bottle in the kitchen

- 39** (A) (B) (C)  
**40** (A) (B) (C)  
**41** (A) (B) (C)

- 42** (A) (B) (C)  
**43** (A) (B) (C)  
**44** (A) (B) (C)

- 45** (A) (B) (C)  
**46** (A) (B) (C)

**47** Which of the following weather elements is incorrectly matched with its measuring instrument?

- (A) temperature – thermometer
- (B) rainfall – rain gauge
- (C) wind speed – barometer

**48** Akim's family are preparing a disaster emergency kit. Which of the following items would it be best to include?


- (A) a radio, favourite toys, books
- (B) food, water, a torch
- (C) clothing, a camera, chocolate

**49** The loss of many of our Caribbean coral reefs is due to:

- (A) rising sea levels
- (B) melting ice caps making the water cooler
- (C) bleaching caused by rises in sea temperatures

**50** Which of these is NOT a cause of global warming?

- (A) increased greenhouse gases in the atmosphere
- (B) increased numbers and severity of storms
- (C) carbon emissions caused by burning fossil fuels



**47** (A) (B) (C)

**48** (A) (B) (C)

**49** (A) (B) (C)

**50** (A) (B) (C)