

LKPD

MATEMATIKA

Penjumlahan



Nama:










Kelas:
LIVEWORKSHEETS


Nama: _____

Kelas: _____

CODING PENJUMLAHAN

Isilah kotak di bawah ini sesuai dengan kode pada tabel!


								
1	2	3	4	5	6	7	8	9



$$\square + \square = \square$$




$$\square + \square = \square$$



$$\square + \square = \square$$



$$\square + \square = \square$$



$$\square + \square = \square$$




$$\square + \square = \square$$

Nama: _____

Kelas: _____

Nilai: _____

Penjumlahan Dadu Warna



$1 + 2 = 3$

$\square + \square = \square$

$\square + \square = \square$

$\square + \square = \square$

$\square + \square = \square$

$\square + \square = \square$

$\square + \square = \square$

$\square + \square = \square$

$\square + \square = \square$

$\square + \square = \square$

$\square + \square = \square$

$\square + \square = \square$

$\square + \square = \square$

$\square + \square = \square$

$\square + \square = \square$

$\square + \square = \square$

$\square + \square = \square$

$\square + \square = \square$

Nama:

Kelas:

CODING PENJUMLAHAN



Lihat kode angka setiap kue, tuliskan nilainya, lalu hitung jumlahnya pada kotak jawaban.

$$\text{Cake with green frosting} + \text{Cake with two cherries} + \text{Donut} = 5 + 2 + 3 = 10$$

$$\text{Cake with raspberries} + \text{Cupcake with white frosting} + \text{Cupcake with cherry} = \boxed{}$$

$$\text{Cake with two hearts} + \text{Cake with fruit} + \text{Pancake with strawberry} = \boxed{}$$

$$\text{Cake with two cherries} + \text{Cake with raspberries} + \text{Cake with green frosting} = \boxed{}$$

$$\text{Cake with fruit} + \text{Cake with two hearts} + \text{Cupcake with white frosting} = \boxed{}$$