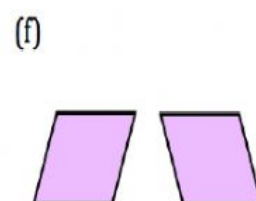
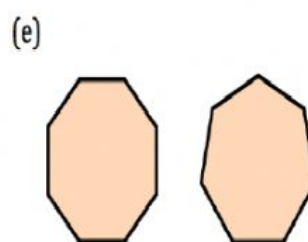
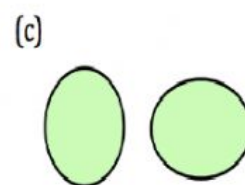
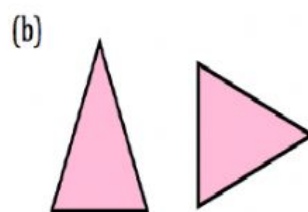
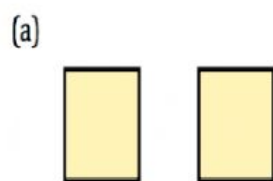



















Identify the congruent figures.



Congruent or Similar Shapes Worksheet

Directions: Look at the shapes on the left and check the box to indicate if they are congruent or similar.

- | | | | | |
|----|---|---|------------------------------------|----------------------------------|
| 1. |  |  | <input type="checkbox"/> Congruent | <input type="checkbox"/> Similar |
| 2. |  |  | <input type="checkbox"/> Congruent | <input type="checkbox"/> Similar |
| 3. |  |  | <input type="checkbox"/> Congruent | <input type="checkbox"/> Similar |
| 4. |  |  | <input type="checkbox"/> Congruent | <input type="checkbox"/> Similar |
| 5. |  |  | <input type="checkbox"/> Congruent | <input type="checkbox"/> Similar |
| 6. |  |  | <input type="checkbox"/> Congruent | <input type="checkbox"/> Similar |
| 7. |  |  | <input type="checkbox"/> Congruent | <input type="checkbox"/> Similar |
| 8. |  |  | <input type="checkbox"/> Congruent | <input type="checkbox"/> Similar |