

LKPD

Matematika

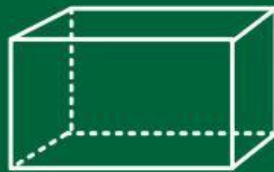
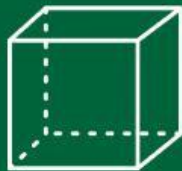
Tema:

Bangun Ruang

SD Kelas 4



Bangun Ruang

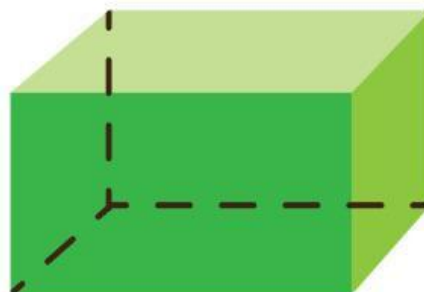

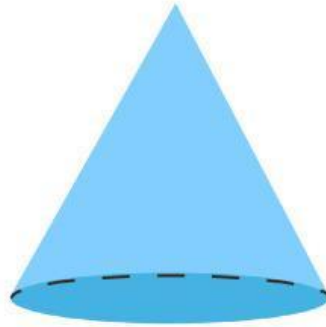
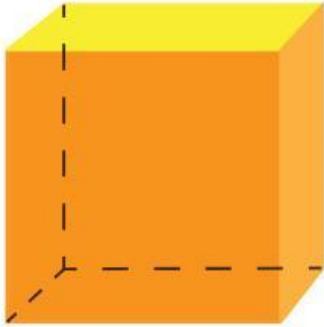


Nama: _____

Kelas: _____

Bangun Ruang

Tuliskan nama-nama bangun ruang di bawah ini.



Bentuk Benda

Hubungkan benda dengan bentuknya.



Kerucut




Kubus



Balok



Bola

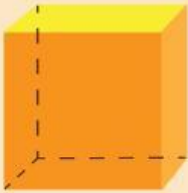



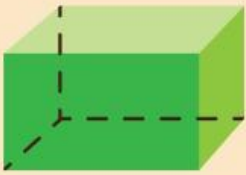


Tabung



Bagian-bagian Bangun Ruang

Tuliskan banyak sisi, sudut, dan rusuk bangun ruang pada tabel di bawah ini.

No	Bangun Ruang	Bagian- bagian
1.		<ul style="list-style-type: none">• Sisi:• Sudut:• Rusuk:
2.		<ul style="list-style-type: none">• Sisi:• Sudut:• Rusuk:
3.		<ul style="list-style-type: none">• Sisi:• Sudut:• Rusuk:
4.		<ul style="list-style-type: none">• Sisi:• Sudut:• Rusuk:
5.		<ul style="list-style-type: none">• Sisi:• Sudut:• Rusuk: