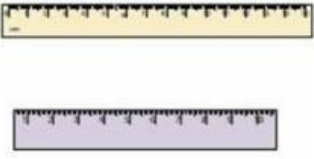


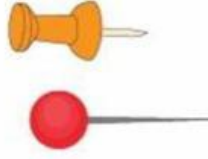
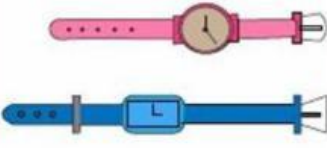




Nama :  
Kelas :

**Lingkari Benda-benda yang ada didalam kelas sesuai perintah!**

<p>1. which is longer?</p> 	<p>2. which is shorter?</p> 
<p>3. which is shorter?</p> 	<p>4. which is longer?</p> 
<p>5. which is longer?</p> 	<p>6. which is shorter?</p> 

**Hitunglah Panjang masing-masing benda berikut sesuai angka yang ditunjukkan pada penggaris!**



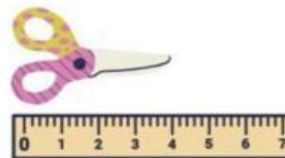
..... cm



..... cm



..... cm



..... cm