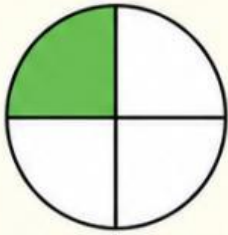


Name: \_\_\_\_\_

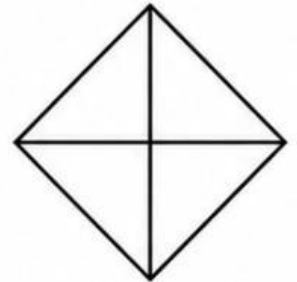
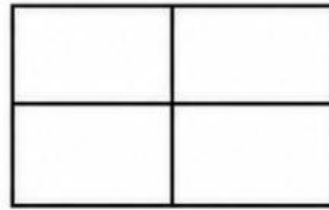
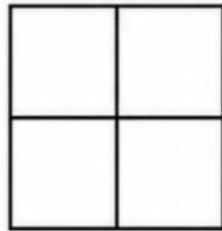

Date: \_\_\_\_\_

# FRACTIONS: QUARTERS

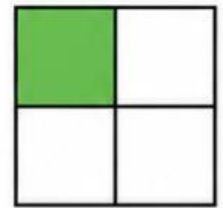
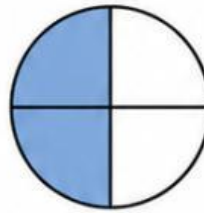
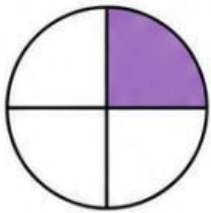


A whole can be split into 4 equal parts.  
Each equal part is called a **quarter**.  
This is **1 quarter**.

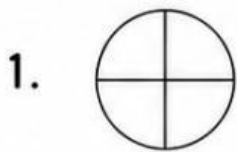
1. Color 1 quarter of each shape.



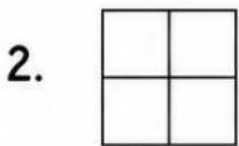
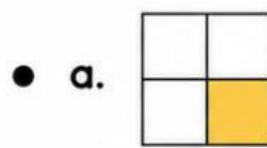
2. Circle the pictures that show 1 quarter shaded.



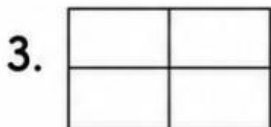
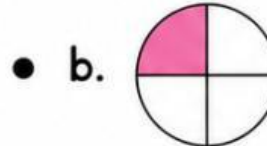
3. Match each shape to the picture that shows 1 quarter shaded.



•



•



•

