
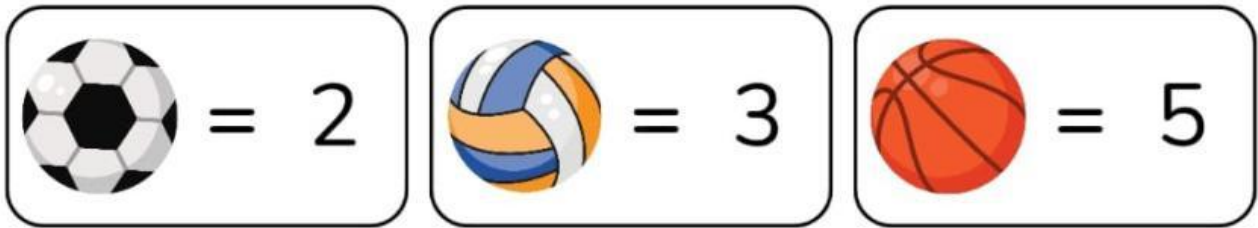


Nama :

Kelas :

Belajar Perkalian

Cermati nilai bola di bawah ini, kemudian hitung hasilnya dengan benar!





Nama: _____

Kelas: _____ Absen No: _____

Penilaian:




Nilai: _____

Paraf: _____


PERKALIAN TIGA DENGAN WORTEL

Tarik garis antara perkalian dengan kelompok wortel yang sesuai.

3×2




3×6



3×5



3×4



3×1



3×3

