



# SUMAS

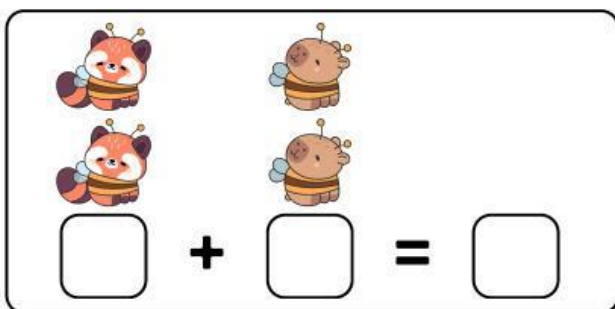
INSTRUCCIONES: CUENTA Y ESCRIBE LA CANTIDAD CORRECTA.




$\square + \square = \square$



$\square + \square = \square$



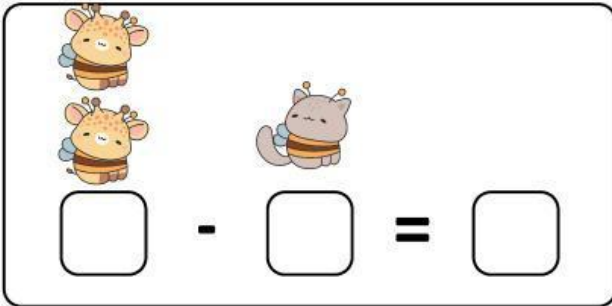
$\square + \square = \square$




$\square + \square = \square$

# RESTAS


INSTRUCCIONES: CUENTA Y ESCRIBE LA CANTIDAD CORRECTA.




Two giraffes and one cat are shown. Below them is a subtraction equation with three empty boxes:  $\square - \square = \square$ .



Three pandas and one elephant are shown. Below them is a subtraction equation with three empty boxes:  $\square - \square = \square$ .



Three foxes and two bees are shown. Below them is a subtraction equation with three empty boxes:  $\square - \square = \square$ .



One duck and one frog are shown. Below them is a subtraction equation with three empty boxes:  $\square - \square = \square$ .