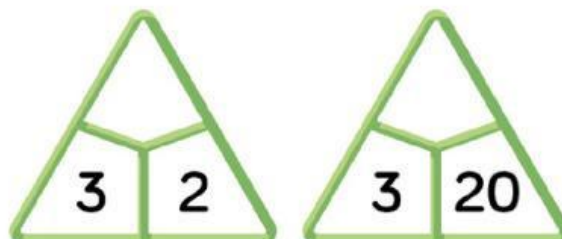
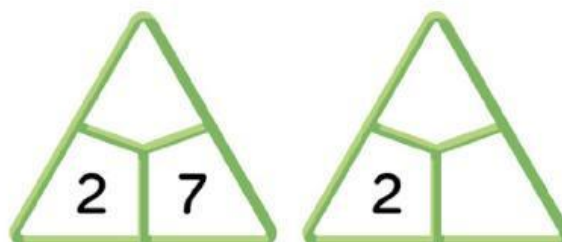



1. Respon les preguntes i completa les capsetes multiplicatives.



- Quantes **barres** hi ha **en total**?
- Quantes **unitats** hi ha a **cada safata**?
- Quantes **unitats** hi ha **en total**?



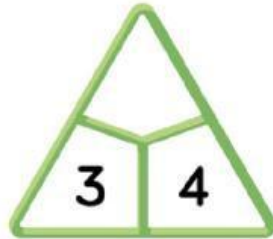

- Quantes **barres** hi ha **en total**?
- Quantes **unitats** hi ha a **cada safata**?
- Quantes **unitats** hi ha **en total**?



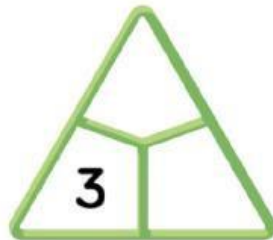
- Quantes **barres** hi ha **en total**?
- Quantes **unitats** hi ha a **cada safata**?
- Quantes **unitats** hi ha **en total**?



2. Completa les capsetes multiplicatives.



$3 \times 4 = \dots\dots\dots$



$3 \times \dots\dots\dots = \dots\dots\dots$

3. Completa.

$6 \times 2 = \square$ $6 \times 20 = \square$
 $60 \times 2 = \square$

$5 \times 9 = \square$ $5 \times 90 = \square$
 $50 \times 9 = \square$