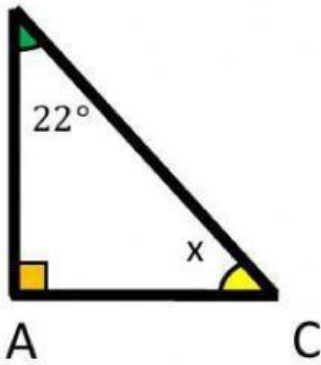


Name \_\_\_\_\_

Date \_\_\_\_\_

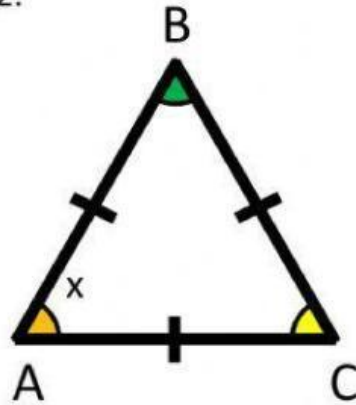
Year Group \_\_\_\_\_

1. Find the missing angle B



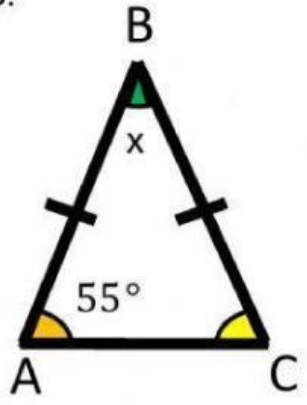
Answer:  $x = \underline{\hspace{1cm}}$ °

2.



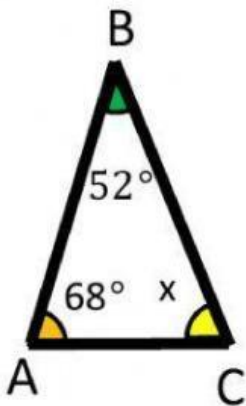
Answer:  $x = \underline{\hspace{1cm}}$ °

3.



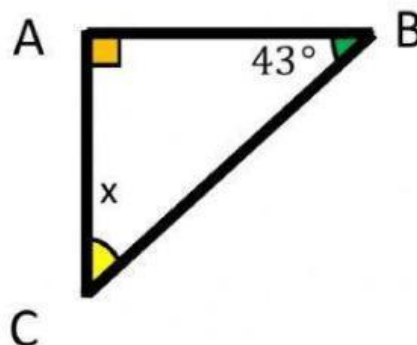
Answer:  $x = \underline{\hspace{1cm}}$ °

4.



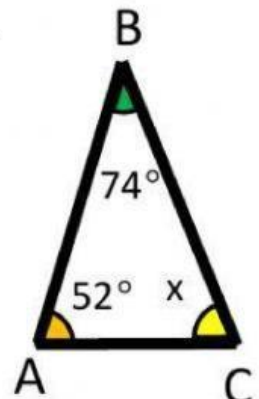
Answer:  $x = \underline{\hspace{1cm}}$ °

5.



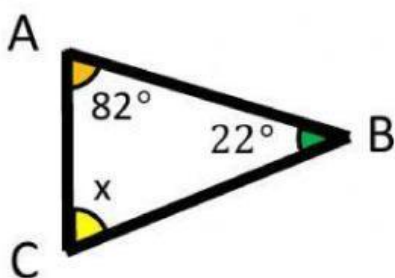
Answer:  $x = \underline{\hspace{1cm}}$ °

6.



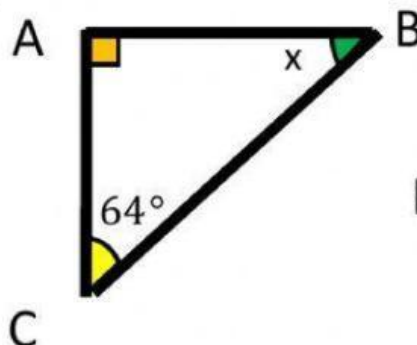
Answer:  $x = \underline{\hspace{1cm}}$ °

7.



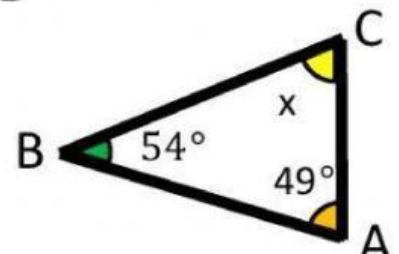
Answer:  $x = \underline{\hspace{1cm}}$ °

8.



Answer:  $x = \underline{\hspace{1cm}}$ °

9.



Answer:  $x = \underline{\hspace{1cm}}$ °