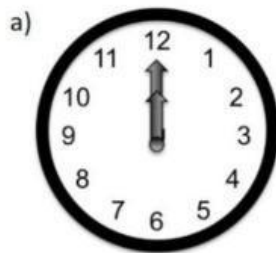


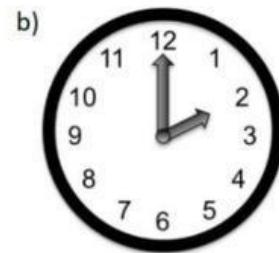
5) Write the time as shown in each clock.



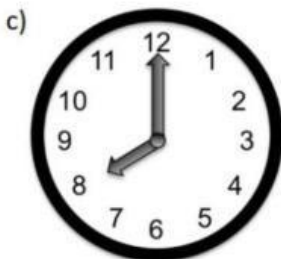
6) Write the hour.



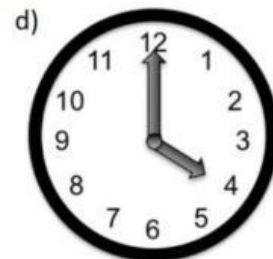
_____ O'Clock



_____ O'Clock




_____ O'Clock



_____ O'Clock



_____ O'Clock



_____ O'Clock