

PARCIAL No. 1 – FRACCIONES CUARTO BACO

1. Marca la fracción que corresponde a la figura 

1. $\frac{3}{5}$

2. $\frac{3}{2}$

3. $\frac{2}{5}$

4. $\frac{2}{3}$

2. Marca la fracción que corresponde a la figura 

1. $\frac{4}{9}$

2. $\frac{5}{9}$

3. $\frac{4}{5}$

4. $\frac{5}{4}$

3. Marca la fracción que corresponde a la figura 


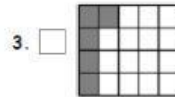
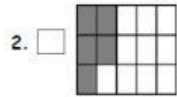
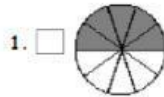
1. $\frac{2}{6}$

2. $\frac{4}{6}$

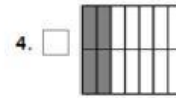

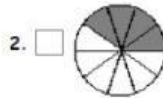
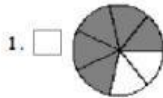
3. $\frac{2}{4}$

4. $\frac{4}{2}$

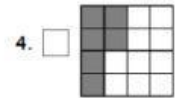
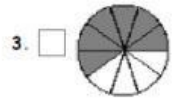
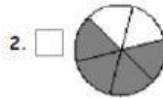
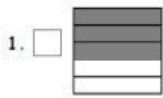
4. Marca la figura que corresponde a la fracción $\frac{5}{15}$



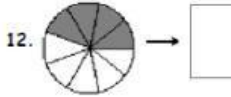
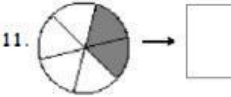
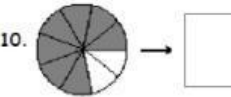
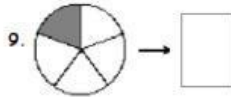
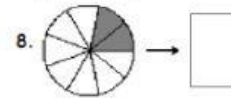
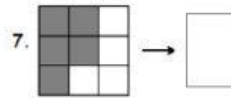
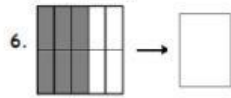
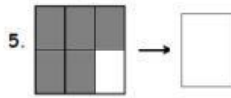
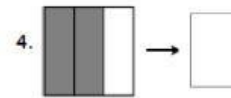
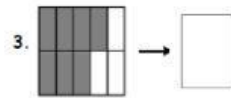
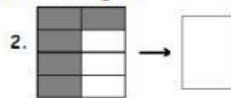
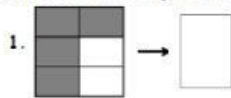
5. Marca la figura que corresponde a la fracción $\frac{10}{14}$



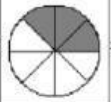
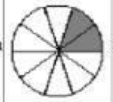

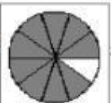

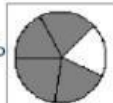
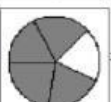
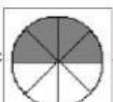

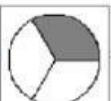
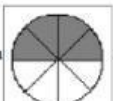



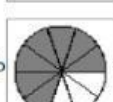
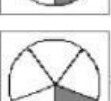
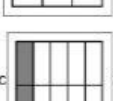
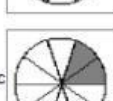
6. Marca la figura que corresponde a la fracción $\frac{6}{10}$




7. Escribe la fracción que corresponde a cada figura:




8. Une cada figura con su fracción correspondiente.


1.	a		<input type="checkbox"/> $\frac{3}{8}$ A	2.	a		<input type="checkbox"/> $\frac{4}{5}$ A	3.	a		<input type="checkbox"/> $\frac{9}{12}$ A
	b		<input type="checkbox"/> $\frac{9}{10}$ B		b		<input type="checkbox"/> $\frac{2}{10}$ B		b		<input type="checkbox"/> $\frac{5}{9}$ B
	c		<input type="checkbox"/> $\frac{4}{5}$ C		c		<input type="checkbox"/> $\frac{4}{8}$ C		c		<input type="checkbox"/> $\frac{4}{5}$ C
4.	a		<input type="checkbox"/> $\frac{1}{3}$ A	5.	a		<input type="checkbox"/> $\frac{2}{12}$ A	6.	a		<input type="checkbox"/> $\frac{8}{12}$ A
	b		<input type="checkbox"/> $\frac{6}{8}$ B		b		<input type="checkbox"/> $\frac{2}{10}$ B		b		<input type="checkbox"/> $\frac{7}{10}$ B
	c		<input type="checkbox"/> $\frac{1}{5}$ C		c		<input type="checkbox"/> $\frac{1}{12}$ C		c		<input type="checkbox"/> $\frac{2}{10}$ C
			<input type="checkbox"/> $\frac{2}{3}$ D				<input type="checkbox"/> $\frac{4}{8}$ D				<input type="checkbox"/> $\frac{1}{3}$ D

9. Marca la fracción cuyo valor sea equivalente al de la figura .

1. $\frac{6}{7}$ 2. $\frac{2}{3}$ 3. $\frac{2}{4}$ 4. $\frac{8}{14}$

10. Marca la fracción cuyo valor sea equivalente al de la figura .

1. $\frac{4}{12}$ 2. $\frac{1}{5}$ 3. $\frac{3}{16}$ 4. $\frac{5}{20}$


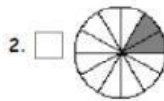
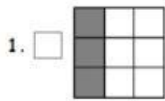
11. Marca la fracción cuyo valor sea equivalente al de la figura .

1. $\frac{2}{3}$ 2. $\frac{1}{2}$ 3. $\frac{2}{6}$ 4. $\frac{2}{12}$

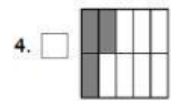
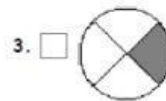
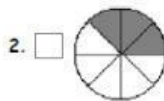
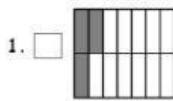
12. Marca la figura cuyo valor sea equivalente al de la fracción $\frac{1}{4}$.

1.  2.  3.  4. 

13. Marca la figura cuyo valor sea equivalente al de la fracción $\frac{1}{3}$.



14. Marca la figura cuyo valor sea equivalente al de la fracción $\frac{3}{12}$.



15. Marca la fracción que sea equivalente a $\frac{3}{2}$.

1. $\frac{2}{3}$

2. $\frac{3}{4}$

3. $\frac{14}{10}$

4. $\frac{15}{10}$

16. Marca la fracción que sea equivalente a $\frac{1}{3}$.

1. $\frac{5}{14}$

2. $\frac{2}{3}$

3. $\frac{2}{4}$

4. $\frac{5}{15}$

17. Marca la fracción que sea equivalente a $\frac{14}{6}$.

1. $\frac{6}{14}$

2. $\frac{7}{3}$

3. $\frac{14}{4}$

4. $\frac{5}{3}$

18. Marca todas las fracciones que tengan un valor equivalente al de la figura



1. $\frac{6}{4}$

2. $\frac{4}{6}$

3. $\frac{3}{4}$

4. $\frac{4}{3}$

5. $\frac{6}{9}$

6. $\frac{2}{3}$

19. Marca todas las fracciones que tengan un valor equivalente al de la figura



1. $\frac{12}{16}$

2. $\frac{15}{20}$

3. $\frac{14}{16}$

4. $\frac{9}{12}$

5. $\frac{6}{8}$

6. $\frac{1}{3}$

20. Marca todas las fracciones que tengan un valor equivalente al de la figura .

1. $\frac{3}{8}$

2. $\frac{3}{12}$

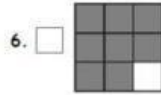
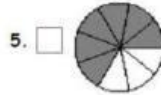
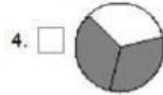
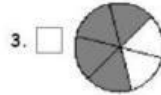
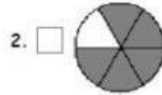
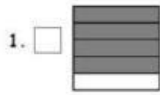
3. $\frac{4}{12}$

4. $\frac{2}{6}$

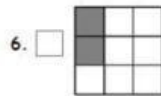
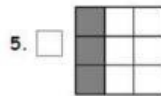
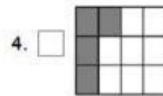
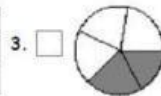
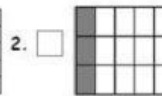
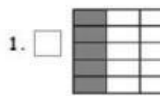
5. $\frac{3}{2}$

6. $\frac{3}{9}$

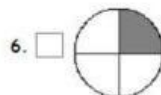
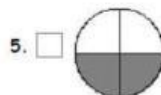

21. Marca todas las figuras cuyo valor sea equivalente al de la fracción $\frac{8}{12}$.



22. Marca todas las figuras cuyo valor sea equivalente al de la fracción $\frac{1}{3}$.



23. Marca todas las figuras cuyo valor sea equivalente al de la fracción $\frac{3}{6}$.



24. Marca todas las fracciones que sean equivalentes a $\frac{3}{2}$.

1. $\frac{15}{12}$

2. $\frac{15}{10}$

3. $\frac{12}{8}$

4. $\frac{5}{4}$

5. $\frac{6}{4}$

6. $\frac{14}{10}$

25. Marca todas las fracciones que sean equivalentes a $\frac{1}{4}$.

1. $\frac{2}{8}$

2. $\frac{1}{6}$

3. $\frac{2}{16}$

4. $\frac{1}{16}$

5. $\frac{6}{16}$

6. $\frac{5}{20}$