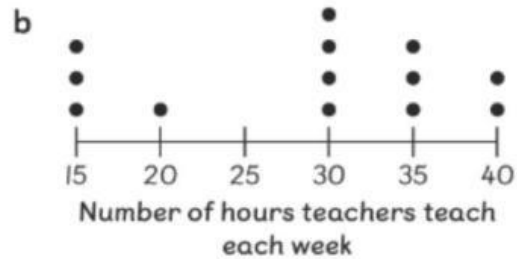
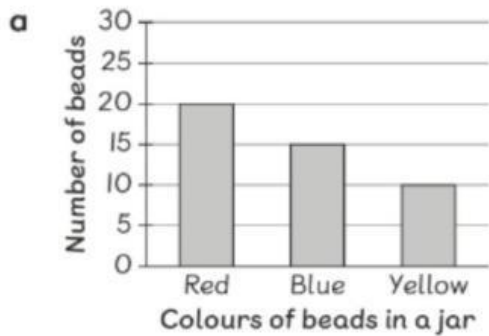
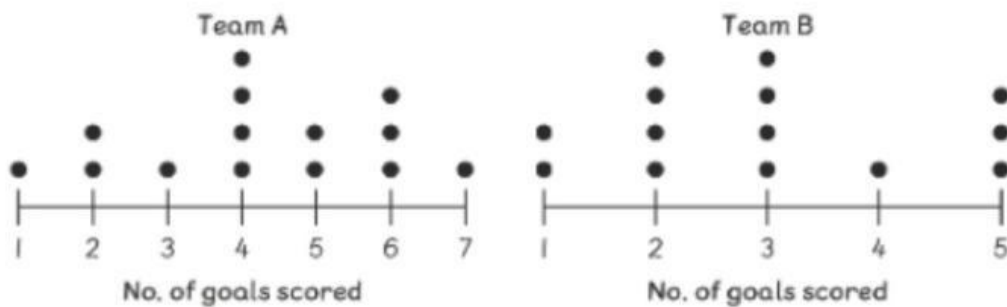


! State whether the data collected is categorical or numerical.



The dot plots show the number of goals scored by 2 soccer teams in a game.



Use the dot plots to complete the following.

- The difference between the most and the least number of goals scored by Team B is _____.
- Team A scored a total of _____ goals for the season.
- Team B scored a total of _____ goals for the season.
- Based on the total number of goals scored for the season, Team _____ is the better soccer team.
- Team _____ showed more variability in the number of goals scored per game.

The table shows how many of each type of fish Rick and Owen caught on a fishing trip.



	Catfish	Carp	Trout
Rick	16	28	17
Owen	18	19	23

- Which type of fish did Rick catch the most? _____
- How many more trouts did Owen catch than Rick? _____
- Who caught the most number of fish? How many more?