

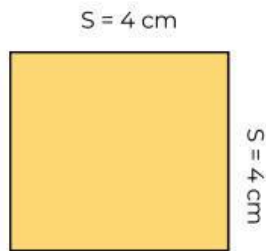
Nama :

Kelas :

MENGHITUNG LUAS PERSEGI

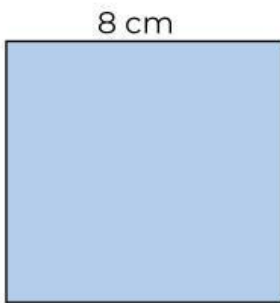
Hitunglah luas persegi seperti contoh!

CONTOH




$$\text{Luas Persegi} = S \times S$$

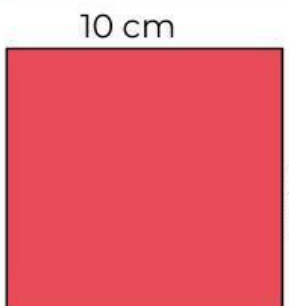
$$\begin{aligned} \text{Luas Persegi} &= 4 \times 4 \\ &= 16 \text{ cm}^2 \end{aligned}$$



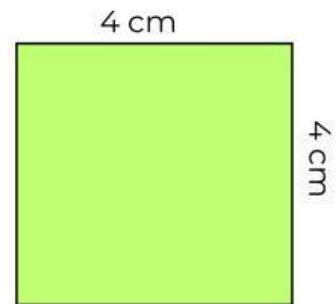
$$\begin{aligned} \text{Luas Persegi} &= \dots \times \dots \\ &= \underline{\hspace{2cm}} \end{aligned}$$



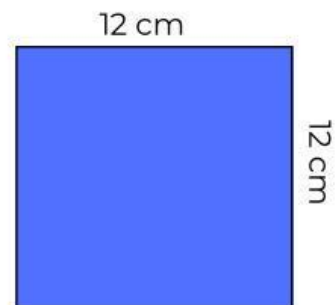
$$\begin{aligned} \text{Luas Persegi} &= \dots \times \dots \\ &= \underline{\hspace{2cm}} \end{aligned}$$



$$\begin{aligned} \text{Luas Persegi} &= \dots \times \dots \\ &= \underline{\hspace{2cm}} \end{aligned}$$



$$\begin{aligned} \text{Luas Persegi} &= \dots \times \dots \\ &= \underline{\hspace{2cm}} \end{aligned}$$



$$\begin{aligned} \text{Luas Persegi} &= \dots \times \dots \\ &= \underline{\hspace{2cm}} \end{aligned}$$

Selamat Mengerjakan