

Name:

Grade: 5th Section:

Date: / / 2026



Al Ridwan Schools
Inspiring schools

Subject:Science.....

Term:.....Second.....

Duration:

Worksheet (2)

Q1: Complete these sentences with the right answer:

Apply

- 1- The sun is a (planet, star)
- 2- The earth is one of (eight, nine) planets in the solar system.
- 3- It takes (24, 365) hours for earth to spin around its axis.

Q2: Fill in the blanks with the right word from the box:

Remembering

East / noon time / spinning / axis / south pole / north pole / evening
/ orbiting / west / morning

1. The sun rises from the ----- and sets in the -----.
2. Earth's ----- is an imaginary line that runs through Earth from the ----- to the -----.
3. The ----- movement is the movement of Earth around itself and the ----- movement is the movement of Earth around the sun.
4. Shadows are taller than the object in the ----- and -----, and they are shorter than the object at -----.

Q3: What causes the four seasons:

Analyze

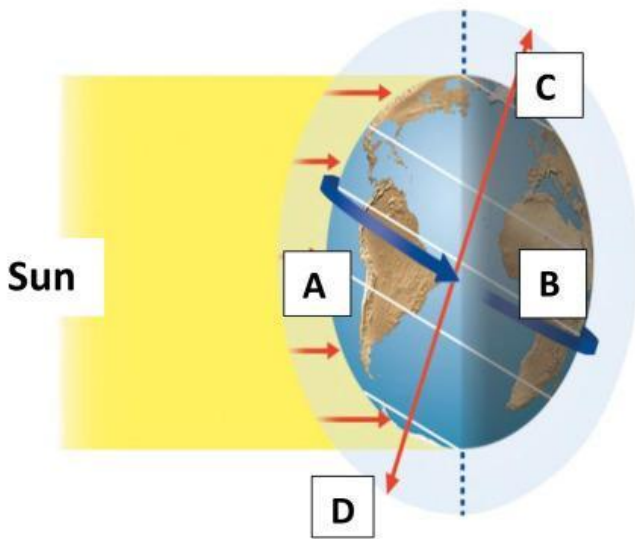
1.
2.



Scan me!!

Q4 : Look at the picture and tell what each number stands for :

Remembering



A : daytime , night .


B: daytime , night .

C : Summer , Winter .

D: summer , winter.

Q 5: a) Write the names of the planets in the solar system in order starting from the closest to the sun:

Remembering



.....


b) Write the names of the four seasons:


1. 2. 3. 4.


Q6: Write weather the area with the X is experiencing daytime or night time:

Evaluate



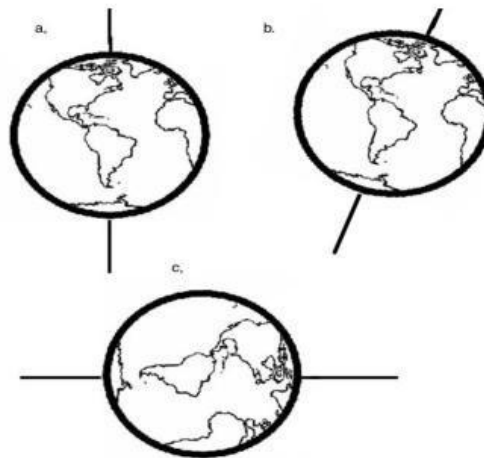






Q7: The picture shows Earth and its axis. Which picture shows the correct orientation of Earth?

Evaluate



Remembering

Q8: Write the following processes in the correct order:

Evaluate

Germination / Fertilization / Pollination / Seed dispersal / Growth



The End