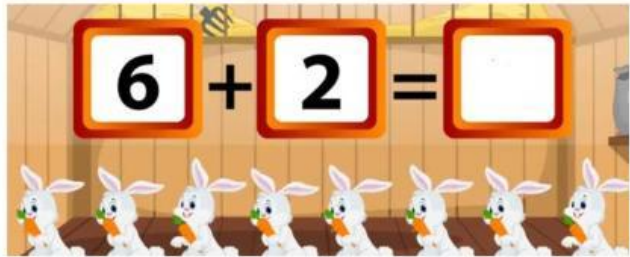


Count and add

$3 + 2 = \square$



$6 + 2 = \square$



$4 + 3 = \square$



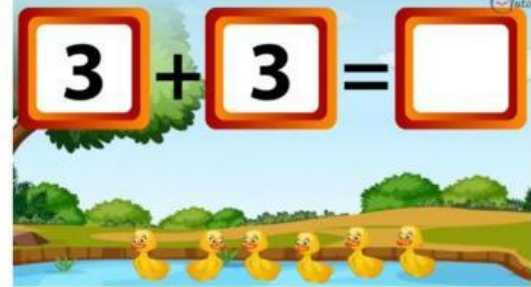
$5 + 1 = \square$




$2 + 2 = \square$



$3 + 3 = \square$




$4 + 1 = \square$



$6 + 1 = \square$



$7 + 2 = \square$



$5 + 5 = \square$

