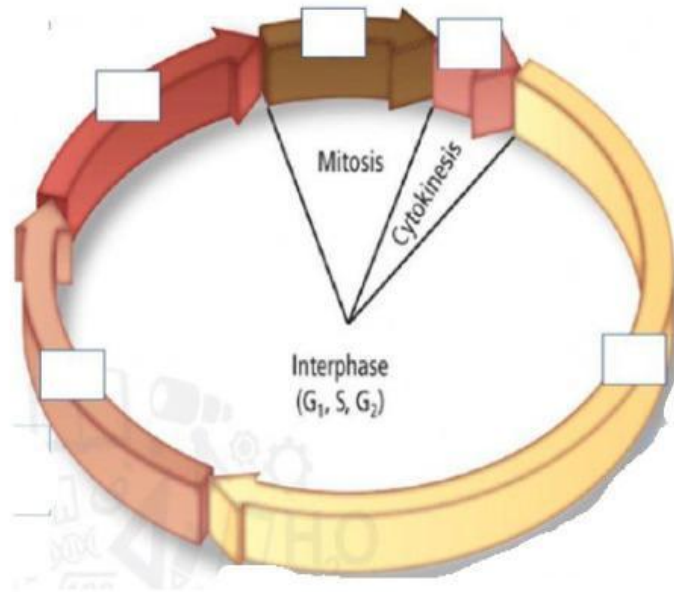


Cell cycle

Label the cell cycle wheel.



M

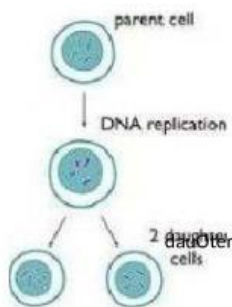
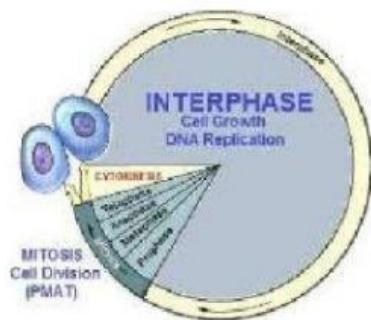
G1

S

G2

C

Cell cycle



Cell Division

1. Most of a cell's life is spent in a period of growth called:

2. DNA replicates during:

3. The nucleus divides into two identical nuclei during

4. The stage of the cell cycle that immediately follows mitosis is called:

5. Mitosis begins with ----- parent cell(s) and ends with daughter cell(s).

6. The----- is the longest period of interphase.

7. -----is made up of three distinct stages: the G1 phase, the S phase and the G2 phase.

Cell cycle

%LIVEWORKSHEETS