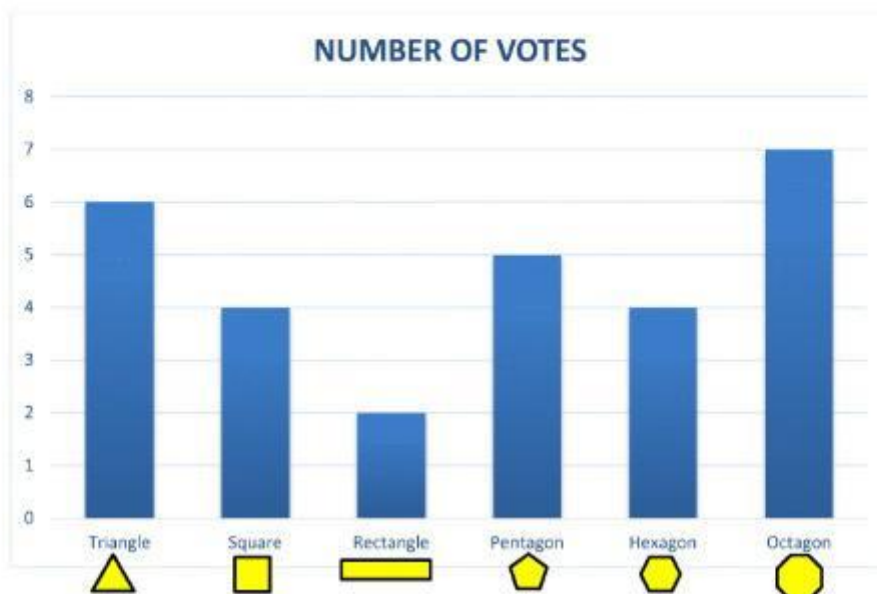









BAR GRAPHS SHEET 1A - SHAPE SURVEY

The children in Salamander Class had a vote on their best shape.



- 1) Which shape was the most popular? _____
- 2) How many votes did the square get? _____ 
- 3) How many votes did the triangle get? _____ 
- 4) How many votes did the pentagon get? _____ 
- 5) How many votes did the hexagon get? _____ 
- 6) How many votes did the octagon get? _____ 
- 7) Which shape got the fewest votes? _____

