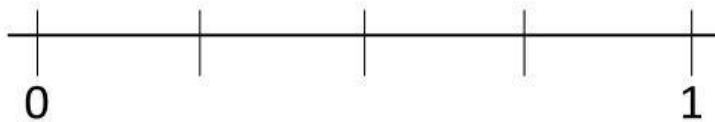


Name: _____

Fraction Test Review

1. What is the bottom number of a fraction called?
2. What is always the numerator in a unit fraction?
3. Complete the number line.



4. Draw a model that represents $\frac{5}{6}$.

5. Compare the following sets of fractions.

$$\frac{7}{8} \bigcirc \frac{5}{8}$$

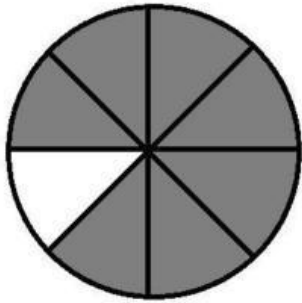
$$\frac{1}{3} \bigcirc \frac{2}{6}$$

$$\frac{2}{4} \bigcirc \frac{1}{8}$$


$$\frac{1}{2} \bigcirc \frac{3}{6}$$

6. Jackie wants to write $\frac{3}{5}$ as the sum of unit fractions. How should Jackie write her equation?

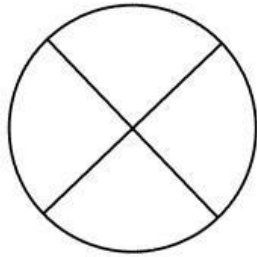
7. What fraction of the figure is shaded?



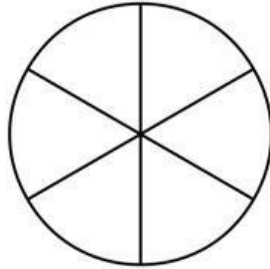
8. Fill in the fraction strips using unit fractions.



9. Ally, Josh, and Brady had pie for dessert. They each ate 2 slices of their own pies. Which person ate the least amount of pie?



Ally




Josh



Brady

10. Chelsie and 3 of her friends equally shared the balloons the pictured below. What fraction did each of them get?



- A. $\frac{3}{8}$
B. $\frac{3}{4}$
C. $\frac{2}{8}$
D. $\frac{1}{2}$