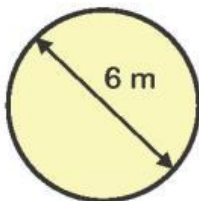




Section A

Find the area and circumference of the shapes below.
Give answers to 2 decimal places.

1)



A = _____

P = _____

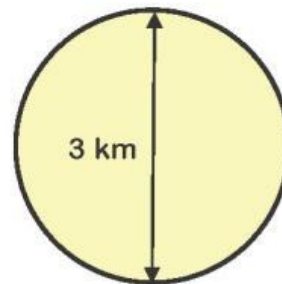
2)



A = _____

P = _____

3)



A = _____

P = _____

4)

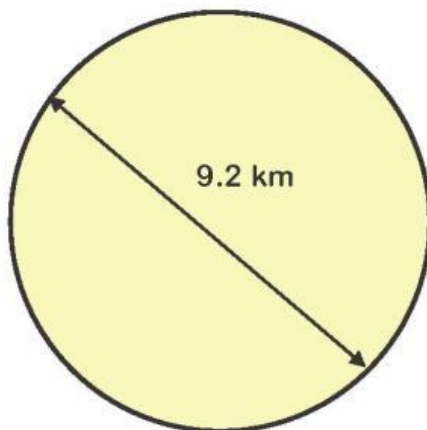


5.5 cm

A = _____

P = _____

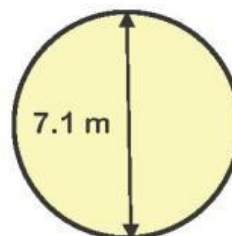
5)



A = _____

P = _____

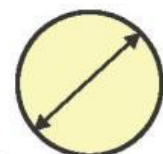
6)



A = _____

P = _____

7)



250 mm

A = _____

P = _____