


Name _____




Independent Practice


Write the number of equal shares in each shape.
If the shares are **NOT** equal, write 0.



____ equal shares




____ equal shares




____ equal shares



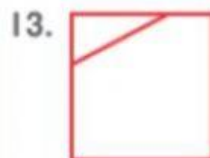
____ equal shares




____ equal shares



____ equal shares



____ equal shares



____ equal shares