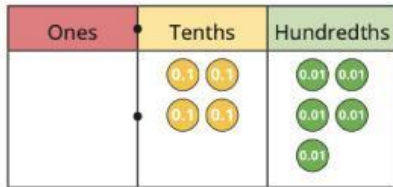


Name: \_\_\_\_\_

# Decimals Quiz

/20

1) Ron has made a number on a place value chart.



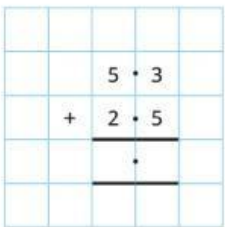
- a) What number has Ron made?
- b) What is 2 tenths more than Ron's number?
- c) What is 4 tenths less than Ron's number?

2) Work out the additions

a)  $0.4 + 0.9 =$

b)  $0.6 + 0.8 =$

3) Use column method to work out the addition

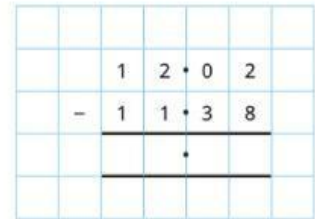
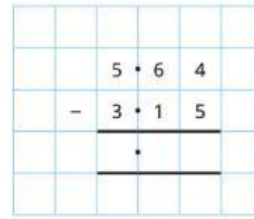


3 Marks

2 Marks

1 Mark


4) Complete the column subtractions



2 Marks

5) Use column method to work out the addition

$14.82 + 3.7$



1 Mark

6)

Whitney has £8.52

She buys this comic.

How much money does she have left?



2 Marks

7) Fill in the missing numbers

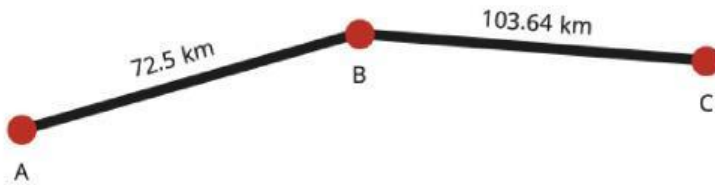
$$230 \xrightarrow{\div 1,000} 0.23 \xrightarrow{\times 10} 2.3$$

$$230 \xrightarrow{\div \boxed{\phantom{000}}} 2.3$$

$$37 \xrightarrow{\div \boxed{\phantom{000}}} 0.037 \xrightarrow{\times \boxed{\phantom{000}}} 3.7$$

$$37 \xrightarrow{\div 10} 3.7$$

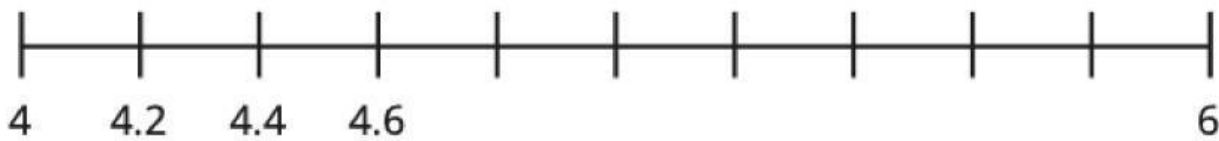
8) Mr Hall drives from point A to point B, then on to point C.



What is the total distance that Mr Hall drives?

km

9) Complete the number lines



3 Marks

2 Marks

2 Marks

2 Marks